



# Number Sequence

Write the missing numbers to complete the sequence

11	12		14	
----	----	--	----	--

	17	18	19	
--	----	----	----	--

12	13		15	
----	----	--	----	--

16	17	18		
----	----	----	--	--

15		17	18	
----	--	----	----	--

13	14			17
----	----	--	--	----

12		14	15	
----	--	----	----	--

15	16	17		
----	----	----	--	--



# Number Sequence

Write the missing numbers to complete the sequence

11	12	13		
----	----	----	--	--

16		18		20
----	--	----	--	----

12		14	15	
----	--	----	----	--

16	17			20
----	----	--	--	----

14		17	18	
----	--	----	----	--

15	16			19
----	----	--	--	----

13		15	16	
----	--	----	----	--

11			14	15
----	--	--	----	----



# Number Sequence

Write the missing numbers in the shapes to complete the sequence

15	16	17		19
----	----	----	---	----



12		13	14	15
----	---	----	----	----



16	17		19	20
----	----	---	----	----



11	12	13		15
----	----	----	---	----



14	15		17	18
----	----	---	----	----



13	14	15		17
----	----	----	---	----



11	12	13	14	
----	----	----	----	---



16		18	19	20
----	---	----	----	----





# Number Sequence

Write the missing numbers in the shapes to complete the sequence

11	12		14	5
----	----	---	----	---



12	13		15	16
----	----	---	----	----



15	16	17		19
----	----	----	---	----




13	14	15	16	
----	----	----	----	---



14		16	17	18
----	---	----	----	----



16	17		19	20
----	----	---	----	----



11	12	13		
----	----	----	---	--





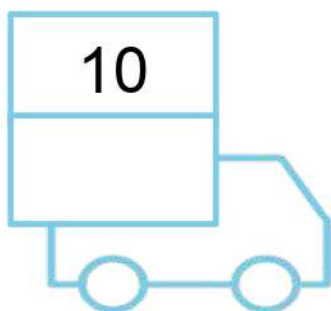
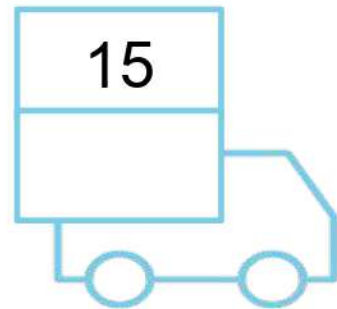

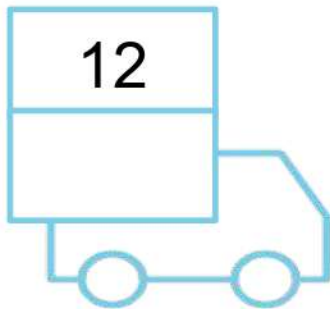

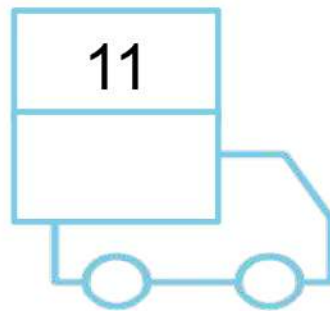
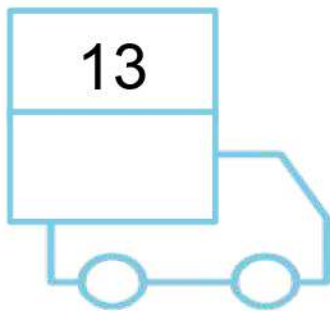
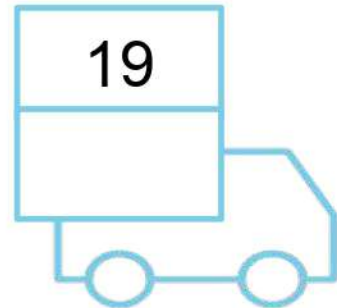
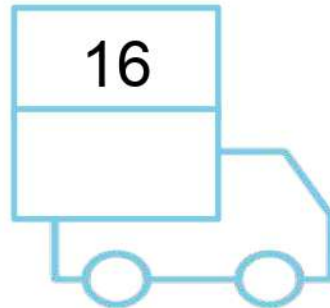
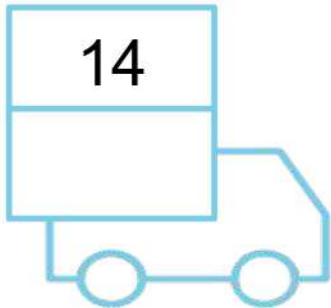
15		17	18	19
----	---	----	----	----





# Number Sequence

Write the numbers that comes after the given number

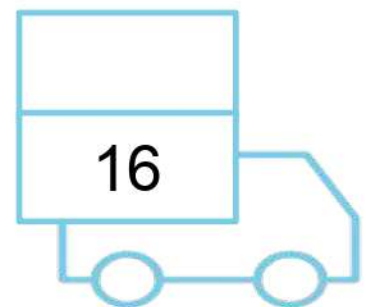


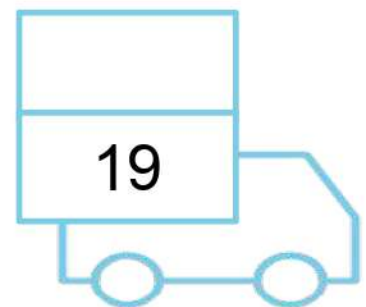


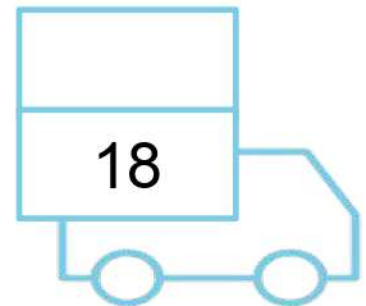

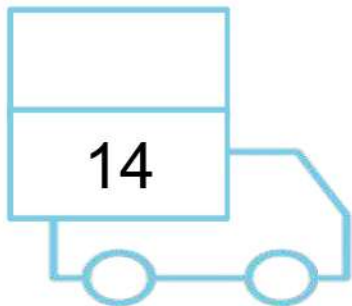
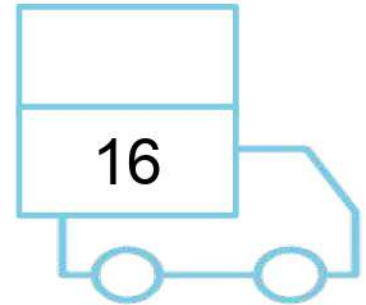
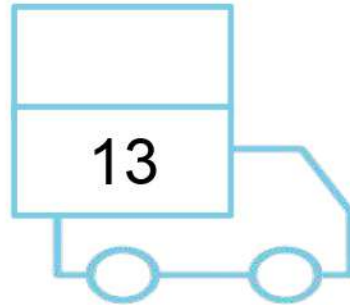
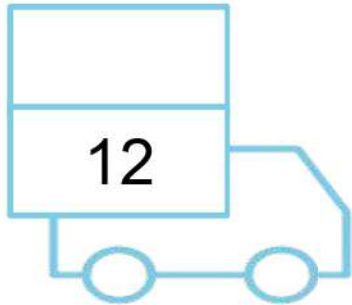






# Number Sequence

Write the numbers that comes before the given number



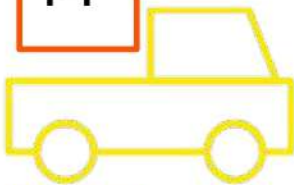


# Number Sequence

Write the numbers that comes in between the given numbers

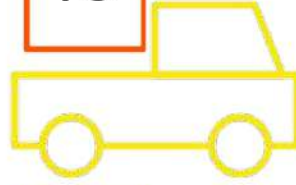
12

14



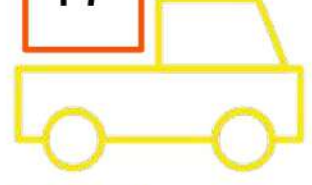
16

18



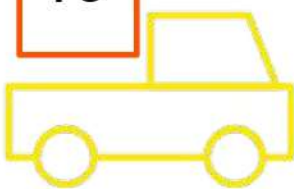
15

17



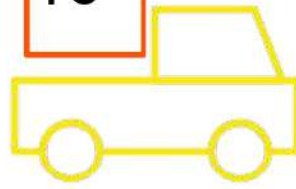
17

19



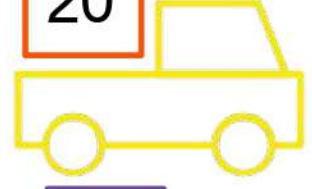
14

16




18

20




11

13




17

19



13

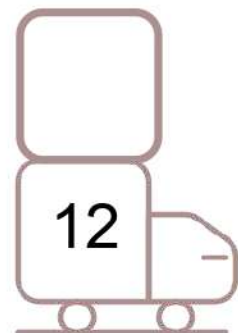
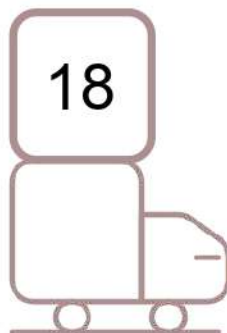
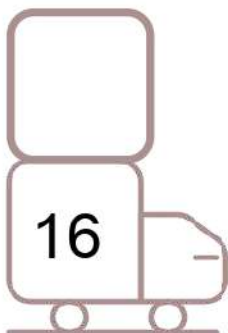

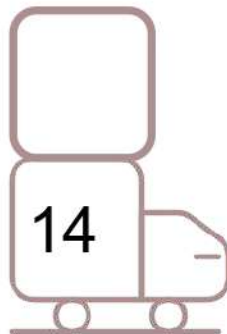
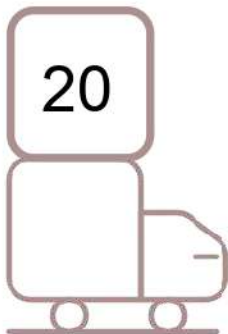
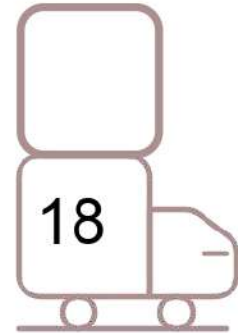
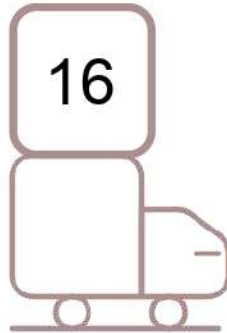
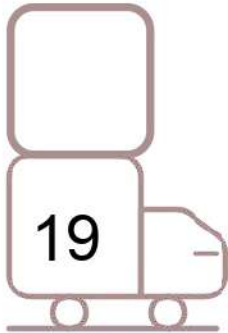
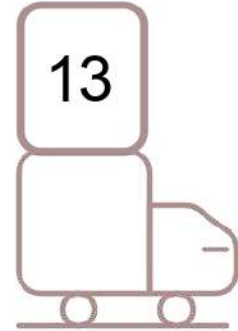
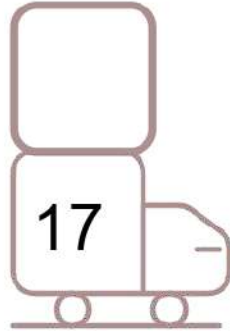
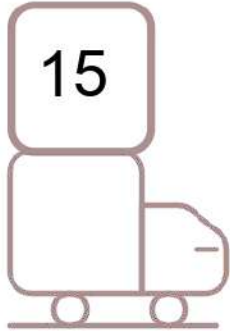
15





# Number Sequence

Write the numbers that comes before and after  
the given numbers


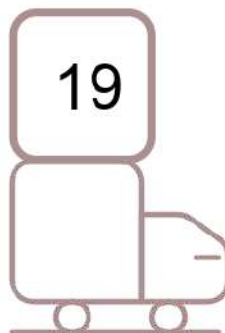
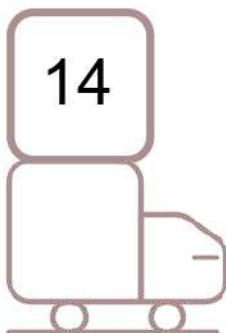
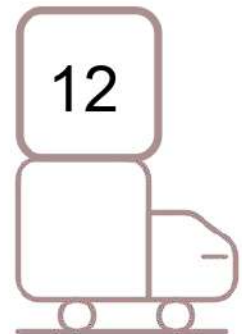
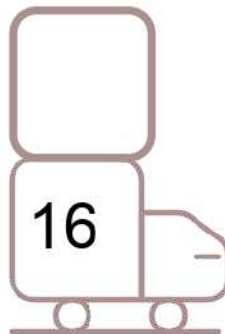

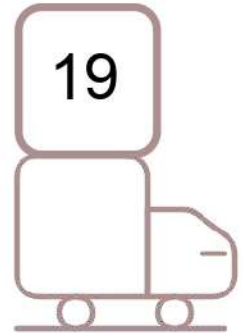


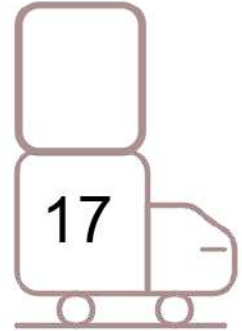








# Number Sequence



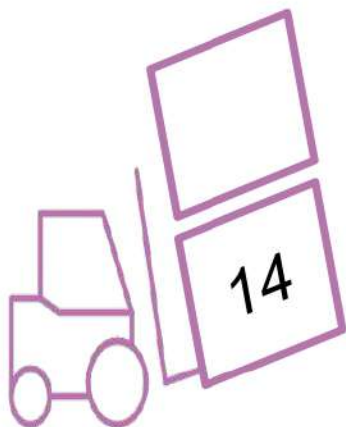






Write the numbers that comes before and after  
the given numbers





# Number Sequence








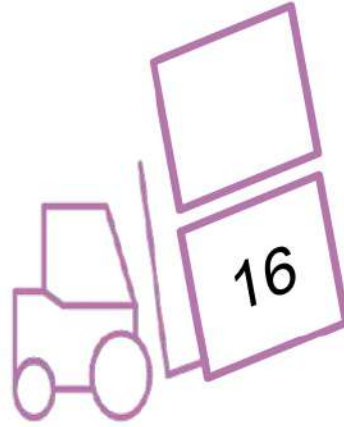

Write the numbers that comes before and after  
the given numbers





# Number Sequence

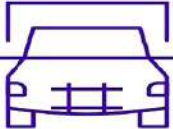
Write the numbers that comes before and after  
the given numbers

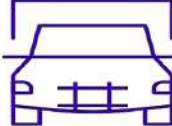





# Number Sequence

Write the numbers that comes before and after  
the given numbers






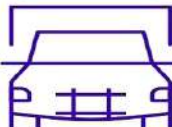














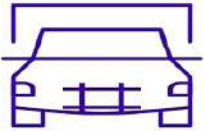




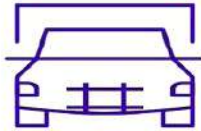
# Number Sequence

Write the numbers that comes before and after  
the given numbers

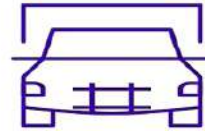
16



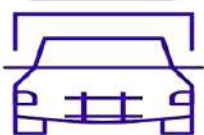
19



11



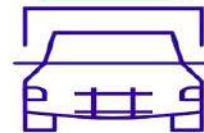
13



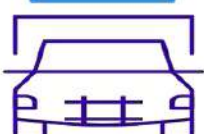
18



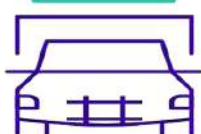
20




17



11



12



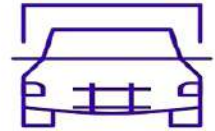
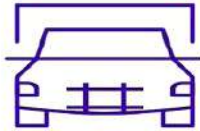
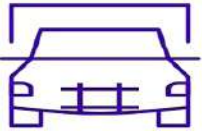




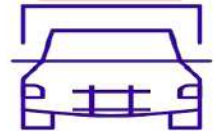
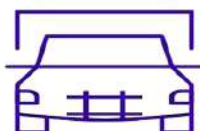
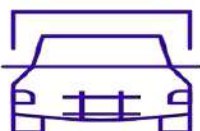
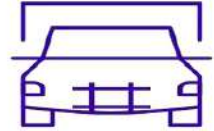
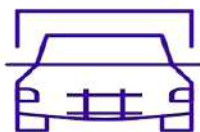
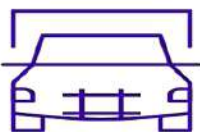
# Number Sequence

Write the numbers that comes before and after  
the given numbers

14




15



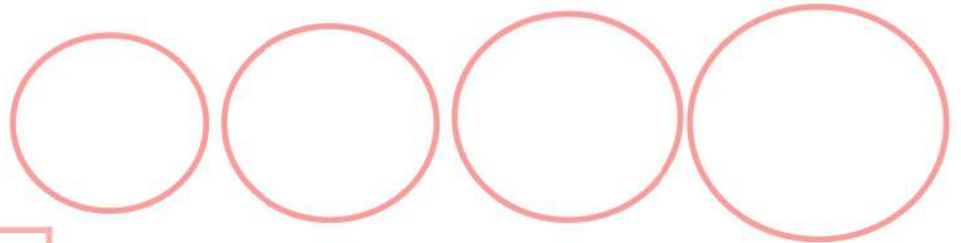
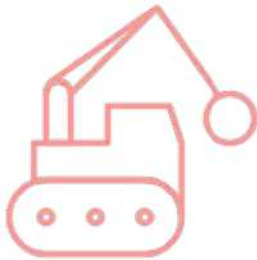


# Number Sequence


Write the numbers from small to big in the circles




11	17	13	15
----	----	----	----



11	14	18	15
----	----	----	----



18	12	14	16
----	----	----	----

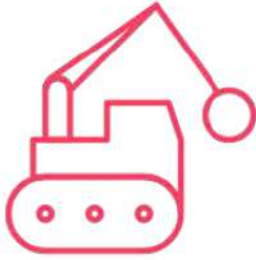


19	12	11	13
----	----	----	----



# Number Sequence

Write the numbers from small to big in the circles



○	○	○	○
---	---	---	---

12	15	18	11
----	----	----	----



○	○	○	○
---	---	---	---

18	20	15	14
----	----	----	----



○	○	○	○
---	---	---	---

13	17	19	13
----	----	----	----



○	○	○	○
---	---	---	---

12	17	16	20
----	----	----	----



# Number Sequence

Write the numbers from small to big in the boxes

13	12	16		<		<	
----	----	----	--	---	--	---	--

12	16	19		<		<	
----	----	----	--	---	--	---	--

13	12	11		<		<	
----	----	----	--	---	--	---	--

14	18	13		<		<	
----	----	----	--	---	--	---	--

16	15	19		<		<	
----	----	----	--	---	--	---	--

14	11	17		<		<	
----	----	----	--	---	--	---	--



# Number Sequence

Write the numbers from small to big in the boxes

11	12	17		<		<	
----	----	----	--	---	--	---	--

15	18	19		<		<	
----	----	----	--	---	--	---	--

11	14	16		<		<	
----	----	----	--	---	--	---	--

15	18	19		<		<	
----	----	----	--	---	--	---	--

20	15	16		<		<	
----	----	----	--	---	--	---	--

12	18	14		<		<	
----	----	----	--	---	--	---	--





# Number Sequence

Write the numbers from small to big in the boxes

13	17	11	15	<input type="text"/>	<	<input type="text"/>	<	<input type="text"/>	<	<input type="text"/>
----	----	----	----	----------------------	---	----------------------	---	----------------------	---	----------------------

11	13	12	16	<input type="text"/>	<	<input type="text"/>	<	<input type="text"/>	<	<input type="text"/>
----	----	----	----	----------------------	---	----------------------	---	----------------------	---	----------------------

15	12	17	14	<input type="text"/>	<	<input type="text"/>	<	<input type="text"/>	<	<input type="text"/>
----	----	----	----	----------------------	---	----------------------	---	----------------------	---	----------------------

19	15	12	14	<input type="text"/>	<	<input type="text"/>	<	<input type="text"/>	<	<input type="text"/>
----	----	----	----	----------------------	---	----------------------	---	----------------------	---	----------------------

16	12	18	15	<input type="text"/>	<	<input type="text"/>	<	<input type="text"/>	<	<input type="text"/>
----	----	----	----	----------------------	---	----------------------	---	----------------------	---	----------------------

19	20	18	15	<input type="text"/>	<	<input type="text"/>	<	<input type="text"/>	<	<input type="text"/>
----	----	----	----	----------------------	---	----------------------	---	----------------------	---	----------------------



# Number Sequence

Write the numbers from small to big in the boxes

12	15	18	19	<input type="text"/>	<	<input type="text"/>	<	<input type="text"/>	<	<input type="text"/>
----	----	----	----	----------------------	---	----------------------	---	----------------------	---	----------------------

19	15	13	20	<input type="text"/>	<	<input type="text"/>	<	<input type="text"/>	<	<input type="text"/>
----	----	----	----	----------------------	---	----------------------	---	----------------------	---	----------------------

17	14	12	11	<input type="text"/>	<	<input type="text"/>	<	<input type="text"/>	<	<input type="text"/>
----	----	----	----	----------------------	---	----------------------	---	----------------------	---	----------------------

20	13	17	18	<input type="text"/>	<	<input type="text"/>	<	<input type="text"/>	<	<input type="text"/>
----	----	----	----	----------------------	---	----------------------	---	----------------------	---	----------------------

15	11	17	11	<input type="text"/>	<	<input type="text"/>	<	<input type="text"/>	<	<input type="text"/>
----	----	----	----	----------------------	---	----------------------	---	----------------------	---	----------------------

14	20	19	14	<input type="text"/>	<	<input type="text"/>	<	<input type="text"/>	<	<input type="text"/>
----	----	----	----	----------------------	---	----------------------	---	----------------------	---	----------------------