



# Skip Counting by 10

Count the pictures. Cut and Paste in sequence

20	40	60	80	100
10	30	50	70	90




# Skip Counting by 10

Count the pictures and paste in sequence.  
Skip count by 10 to write the numbers





# Skip Counting by 10




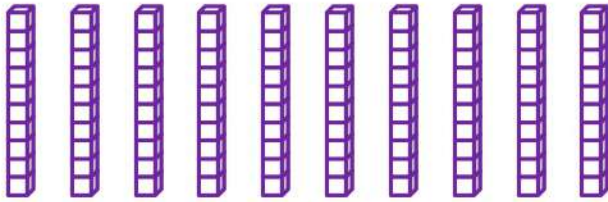
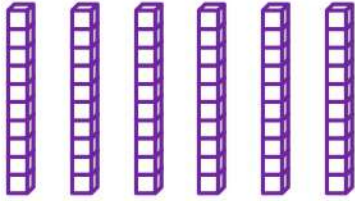
Count the pictures and write the numbers

	<input type="text"/>
	<input type="text"/>
	<input type="text"/>
	<input type="text"/>
	<input type="text"/>



# Skip Counting by 10

Count the pictures and write the numbers





# Skip Counting by 10

Skip count the pictures by 10 and circle the answer

100

70      10      40

300

30      90      10

500

50      80      60

200

10      30      20

400

20      80      40



# Skip Counting by 10

Skip count the pictures by 10 and circle the answer

9 vertical bars, each with 10 small squares. To the right are three circles containing the numbers 70, 90, and 40.

7 vertical bars, each with 10 small squares. To the right are three circles containing the numbers 30, 90, and 70.

11 vertical bars, each with 10 small squares. To the right are three circles containing the numbers 100, 80, and 60.






6 vertical bars, each with 10 small squares. To the right are three circles containing the numbers 10, 30, and 60.

8 vertical bars, each with 10 small squares. To the right are three circles containing the numbers 20, 80, and 40.



# Skip Counting by 10


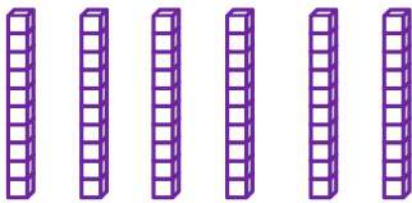



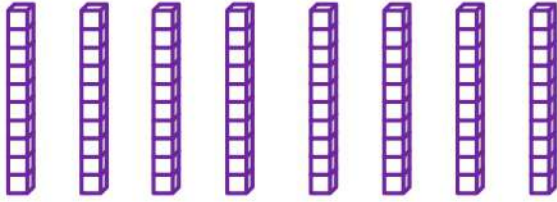
Skip count the pictures by 10 and write the answer





# Skip Counting by 10

Skip count the pictures by 10 and write the answer

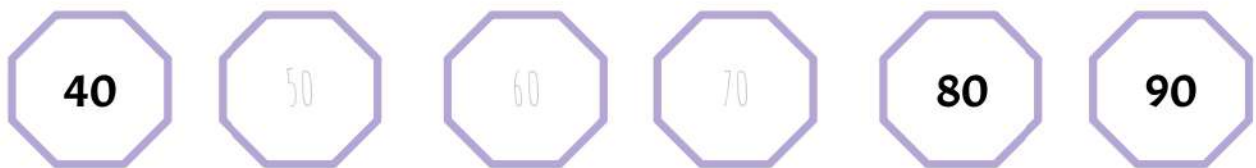
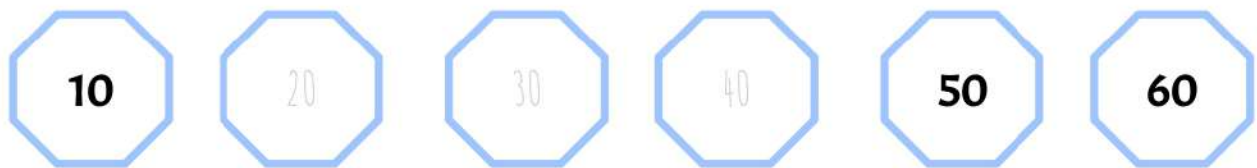
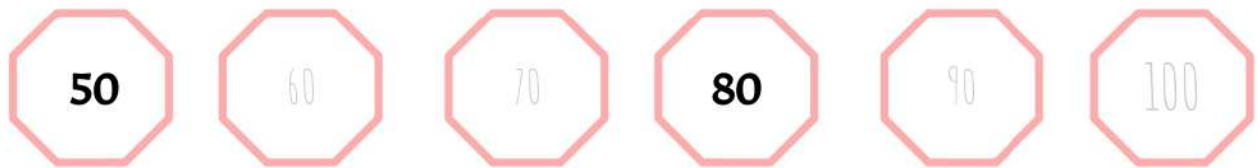






# Skip Counting by 10

Trace and write the answer in its sequence





# Skip Counting by 10

Write before and after numbers to complete the number sequence

10	20		40	
----	----	--	----	--

20			50	60
----	--	--	----	----

40			70	80
----	--	--	----	----

60	70	80		
----	----	----	--	--

50	60			90
----	----	--	--	----

10		30		40
----	--	----	--	----

60		80	90	
----	--	----	----	--

40	50			
----	----	--	--	--



# Skip Counting by 10

Write before and after numbers to complete the number sequence

20	30			60
----	----	--	--	----

50		70	80	
----	--	----	----	--

40		60	70	
----	--	----	----	--

10			40	50
----	--	--	----	----

30	40	50	60	
----	----	----	----	--

60	70	80		
----	----	----	--	--

40	50			80
----	----	--	--	----

60				100
----	--	--	--	-----



# Skip Counting by 10

Write the missing numbers to complete the sequence

