












Number Sequence


Write the numbers that comes before and after
the given numbers

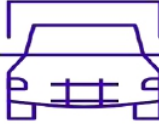


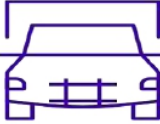


Number Sequence

Write the numbers that comes before and after
the given numbers























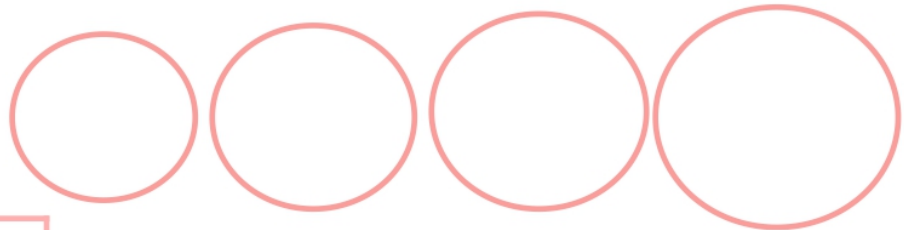


Number Sequence


Write the numbers from small to big in the circles



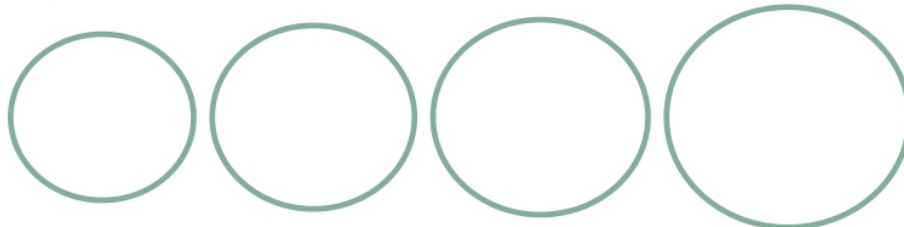
1	7	13	15
---	---	----	----



35	48	52	59
----	----	----	----



59	62	74	66
----	----	----	----



25	88	34	55
----	----	----	----



Number Sequence

Write the numbers from small to big in the boxes

15	12	17	<input type="text"/>	<	<input type="text"/>	<	<input type="text"/>
----	----	----	----------------------	---	----------------------	---	----------------------

95	72	38	<input type="text"/>	<	<input type="text"/>	<	<input type="text"/>
----	----	----	----------------------	---	----------------------	---	----------------------

45	61	77	<input type="text"/>	<	<input type="text"/>	<	<input type="text"/>
----	----	----	----------------------	---	----------------------	---	----------------------

43	28	80	<input type="text"/>	<	<input type="text"/>	<	<input type="text"/>
----	----	----	----------------------	---	----------------------	---	----------------------

99	90	80	<input type="text"/>	<	<input type="text"/>	<	<input type="text"/>
----	----	----	----------------------	---	----------------------	---	----------------------

92	84	51	<input type="text"/>	<	<input type="text"/>	<	<input type="text"/>
----	----	----	----------------------	---	----------------------	---	----------------------



Number Sequence

Write the numbers from small to big in the boxes

1	5	16	<input type="text"/>	<	<input type="text"/>	<	<input type="text"/>
---	---	----	----------------------	---	----------------------	---	----------------------

19	36	19	<input type="text"/>	<	<input type="text"/>	<	<input type="text"/>
----	----	----	----------------------	---	----------------------	---	----------------------

42	57	10	<input type="text"/>	<	<input type="text"/>	<	<input type="text"/>
----	----	----	----------------------	---	----------------------	---	----------------------

95	81	21	<input type="text"/>	<	<input type="text"/>	<	<input type="text"/>
----	----	----	----------------------	---	----------------------	---	----------------------

39	45	19	<input type="text"/>	<	<input type="text"/>	<	<input type="text"/>
----	----	----	----------------------	---	----------------------	---	----------------------

99	97	17	<input type="text"/>	<	<input type="text"/>	<	<input type="text"/>
----	----	----	----------------------	---	----------------------	---	----------------------



Number Sequence

Write the numbers from small to big in the boxes

85	95	75	<input type="text"/>	<	<input type="text"/>	<	<input type="text"/>
----	----	----	----------------------	---	----------------------	---	----------------------

42	8	51	<input type="text"/>	<	<input type="text"/>	<	<input type="text"/>
----	---	----	----------------------	---	----------------------	---	----------------------

11	14	16	<input type="text"/>	<	<input type="text"/>	<	<input type="text"/>
----	----	----	----------------------	---	----------------------	---	----------------------

99	33	29	<input type="text"/>	<	<input type="text"/>	<	<input type="text"/>
----	----	----	----------------------	---	----------------------	---	----------------------

6	62	76	<input type="text"/>	<	<input type="text"/>	<	<input type="text"/>
---	----	----	----------------------	---	----------------------	---	----------------------

97	18	22	<input type="text"/>	<	<input type="text"/>	<	<input type="text"/>
----	----	----	----------------------	---	----------------------	---	----------------------



Number Sequence

Write the numbers from small to big in the boxes

13	17	11	15	<input type="text"/>	<	<input type="text"/>	<	<input type="text"/>	<	<input type="text"/>
----	----	----	----	----------------------	---	----------------------	---	----------------------	---	----------------------

1	13	12	6	<input type="text"/>	<	<input type="text"/>	<	<input type="text"/>	<	<input type="text"/>
---	----	----	---	----------------------	---	----------------------	---	----------------------	---	----------------------

85	72	17	94	<input type="text"/>	<	<input type="text"/>	<	<input type="text"/>	<	<input type="text"/>
----	----	----	----	----------------------	---	----------------------	---	----------------------	---	----------------------

99	15	32	64	<input type="text"/>	<	<input type="text"/>	<	<input type="text"/>	<	<input type="text"/>
----	----	----	----	----------------------	---	----------------------	---	----------------------	---	----------------------

97	8	1	75	<input type="text"/>	<	<input type="text"/>	<	<input type="text"/>	<	<input type="text"/>
----	---	---	----	----------------------	---	----------------------	---	----------------------	---	----------------------

55	20	38	59	<input type="text"/>	<	<input type="text"/>	<	<input type="text"/>	<	<input type="text"/>
----	----	----	----	----------------------	---	----------------------	---	----------------------	---	----------------------



Number Sequence

Write the missing numbers in the shapes to complete the sequence

51	52		54	55
----	----	--	----	----



66	67		69	70
----	----	--	----	----



71	72	73		75
----	----	----	--	----



76	77	78	79	
----	----	----	----	--



82		84	85	86
----	--	----	----	----



85	86		88	89
----	----	--	----	----



90	91	92		94
----	----	----	--	----



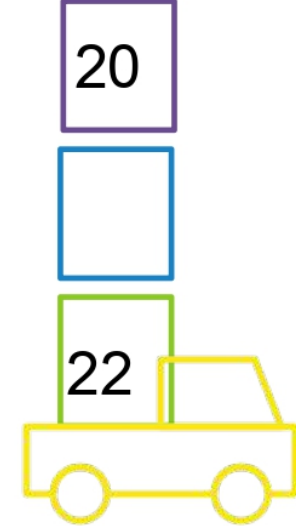
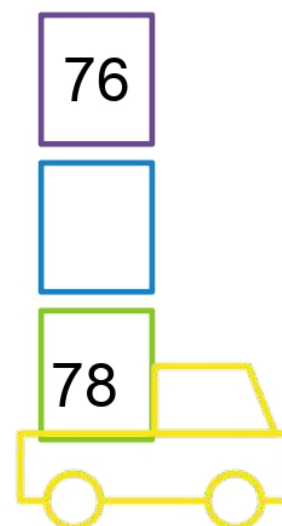
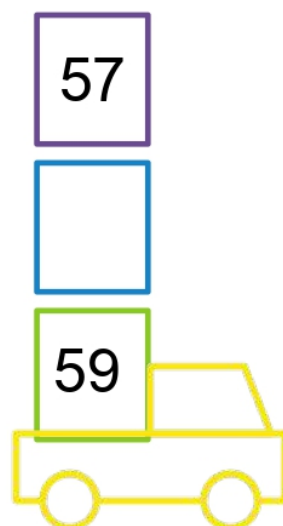
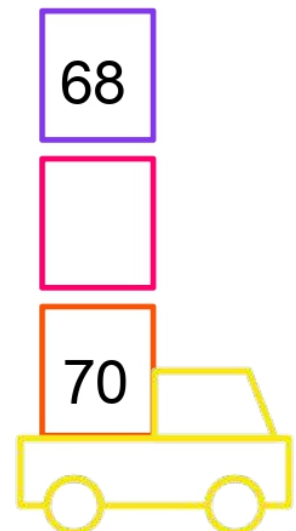
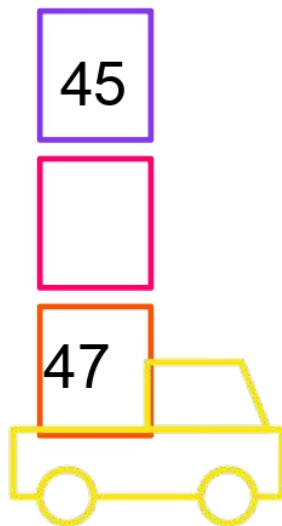
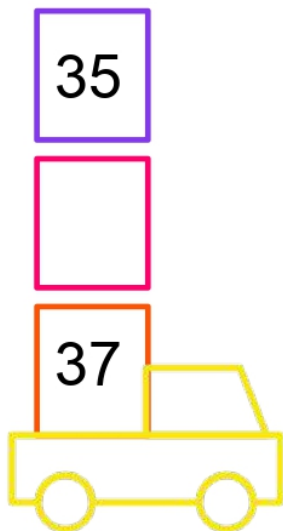
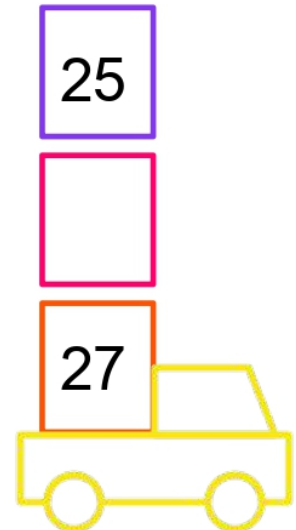
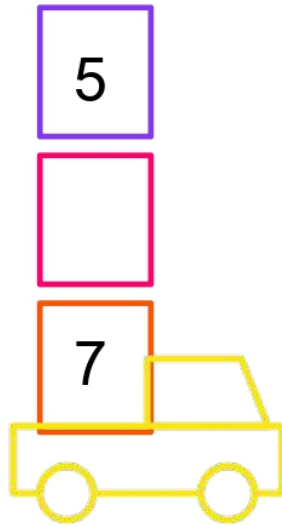
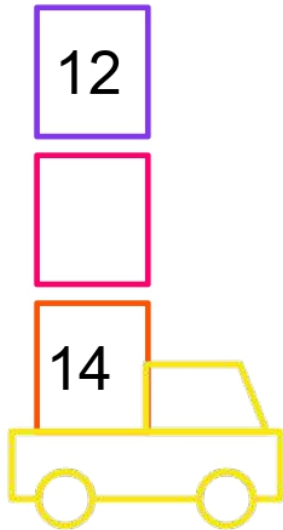
95		97	98	99
----	--	----	----	----





Number Sequence

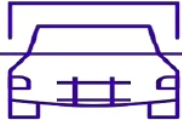
Write the numbers that comes in between the given numbers

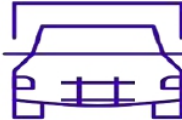


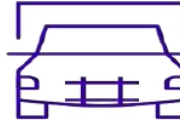



Number Sequence


Write the numbers that comes before and after the given numbers




















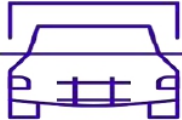


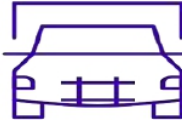


Number Sequence

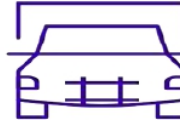
Write the numbers that comes before and after the given numbers

80





79



38




97




69



19


88



92


97






Number Sequence

Write the numbers from small to big in the circles



○	○	○	○
---	---	---	---

12	15	18	11
----	----	----	----



○	○	○	○
---	---	---	---

70	69	85	35
----	----	----	----



○	○	○	○
---	---	---	---

88	72	95	99
----	----	----	----



○	○	○	○
---	---	---	---

99	79	45	15
----	----	----	----



Number Sequence

Write the numbers from small to big in the boxes

13	12	16		<		<	
----	----	----	--	---	--	---	--

35	8	5		<		<	
----	---	---	--	---	--	---	--

45	38	59		<		<	
----	----	----	--	---	--	---	--

66	87	35		<		<	
----	----	----	--	---	--	---	--

95	2	25		<		<	
----	---	----	--	---	--	---	--

88	90	68		<		<	
----	----	----	--	---	--	---	--



Number Sequence

Write the numbers from small to big in the boxes

13	17	11	15
----	----	----	----

< < <

9	5	3	16
---	---	---	----

< < <

15	25	19	54
----	----	----	----

< < <

28	34	10	14
----	----	----	----

< < <

55	38	74	59
----	----	----	----

< < <

98	38	49	85
----	----	----	----

< < <



Number Sequence

Write the numbers from small to big in the boxes

91	1	65	79	<input type="text"/>	<	<input type="text"/>	<	<input type="text"/>	<	<input type="text"/>
----	---	----	----	----------------------	---	----------------------	---	----------------------	---	----------------------

3	88	61	54	<input type="text"/>	<	<input type="text"/>	<	<input type="text"/>	<	<input type="text"/>
---	----	----	----	----------------------	---	----------------------	---	----------------------	---	----------------------

61	29	97	44	<input type="text"/>	<	<input type="text"/>	<	<input type="text"/>	<	<input type="text"/>
----	----	----	----	----------------------	---	----------------------	---	----------------------	---	----------------------

14	99	52	49	<input type="text"/>	<	<input type="text"/>	<	<input type="text"/>	<	<input type="text"/>
----	----	----	----	----------------------	---	----------------------	---	----------------------	---	----------------------

80	70	90	99	<input type="text"/>	<	<input type="text"/>	<	<input type="text"/>	<	<input type="text"/>
----	----	----	----	----------------------	---	----------------------	---	----------------------	---	----------------------

18	65	47	91	<input type="text"/>	<	<input type="text"/>	<	<input type="text"/>	<	<input type="text"/>
----	----	----	----	----------------------	---	----------------------	---	----------------------	---	----------------------



Number Sequence

Write the missing numbers to complete the sequence

1	2		4	
---	---	--	---	--

6	7	8	9	
---	---	---	---	--

11	12		14	
----	----	--	----	--

16	17	18		
----	----	----	--	--

	22	23	24	
--	----	----	----	--

26	27			30
----	----	--	--	----

24	24	26		
----	----	----	--	--

31	32	33		
----	----	----	--	--



Number Sequence

Write the missing numbers to complete the sequence

66	67		69	
----	----	--	----	--

70	71	72		
----	----	----	--	--

73			76	
----	--	--	----	--

74	75			
----	----	--	--	--

76	77		79	
----	----	--	----	--

77	78			80
----	----	--	--	----










80	81		83	84
----	----	--	----	----

81	82			
----	----	--	--	--



Number Sequence

Write the numbers that comes before and after
the given numbers





Number Sequence

Write the missing numbers in the shapes to complete the sequence

1	2	3		5
---	---	---	---	---



12		13	14	15
----	---	----	----	----



16	17		19	20
----	----	---	----	----



21	22	23		25
----	----	----	---	----



25	26		28	29
----	----	---	----	----




30	31	32		34
----	----	----	---	----



35	36	37	38	
----	----	----	----	---





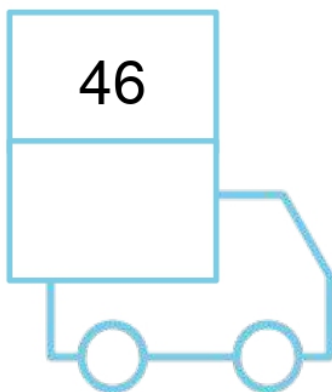




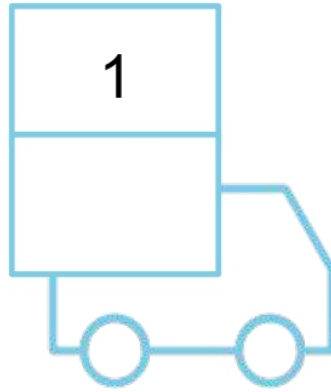

40		41	42	43
----	---	----	----	----





Number Sequence

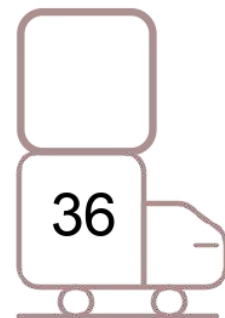





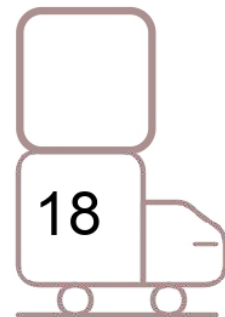


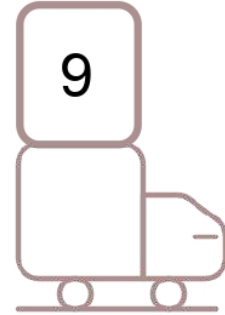
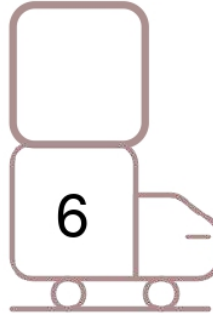
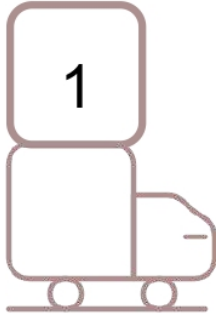
Write the numbers that comes after the given number





Number Sequence

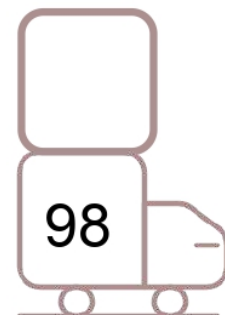
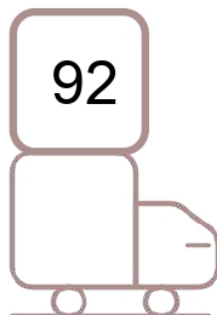
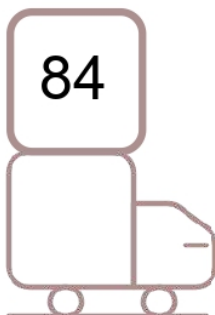
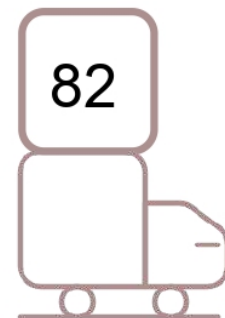
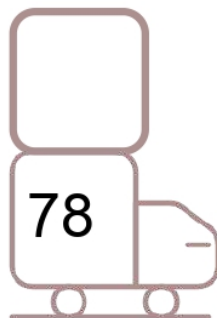

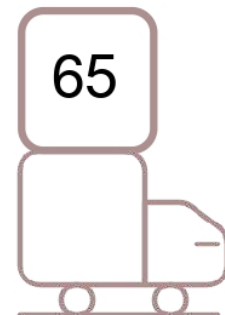


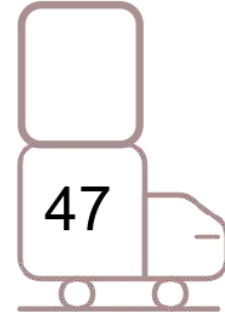


Write the numbers that comes before and after
the given numbers





Number Sequence

Write the numbers that comes before and after
the given numbers





Number Sequence

Write the numbers from small to big in the boxes

64	71	12	19	<input type="text"/>	<	<input type="text"/>	<	<input type="text"/>	<	<input type="text"/>
----	----	----	----	----------------------	---	----------------------	---	----------------------	---	----------------------

84	40	13	20	<input type="text"/>	<	<input type="text"/>	<	<input type="text"/>	<	<input type="text"/>
----	----	----	----	----------------------	---	----------------------	---	----------------------	---	----------------------

57	14	2	11	<input type="text"/>	<	<input type="text"/>	<	<input type="text"/>	<	<input type="text"/>
----	----	---	----	----------------------	---	----------------------	---	----------------------	---	----------------------

90	73	17	98	<input type="text"/>	<	<input type="text"/>	<	<input type="text"/>	<	<input type="text"/>
----	----	----	----	----------------------	---	----------------------	---	----------------------	---	----------------------

15	11	67	33	<input type="text"/>	<	<input type="text"/>	<	<input type="text"/>	<	<input type="text"/>
----	----	----	----	----------------------	---	----------------------	---	----------------------	---	----------------------

34	20	99	88	<input type="text"/>	<	<input type="text"/>	<	<input type="text"/>	<	<input type="text"/>
----	----	----	----	----------------------	---	----------------------	---	----------------------	---	----------------------



Number Sequence

Write the missing numbers to complete the sequence

41	42	43		
----	----	----	--	--

46	47			
----	----	--	--	--

53	54		56	
----	----	--	----	--

56	57			60
----	----	--	--	----

57	58		60	61
----	----	--	----	----

62	63	64		
----	----	----	--	--

63	64			67
----	----	--	--	----

65	66			69
----	----	--	--	----



Number Sequence

Write the missing numbers to complete the sequence

82		84	85	
----	--	----	----	--

83	84	85		
----	----	----	--	--

84		86	87	
----	--	----	----	--

86	87			90
----	----	--	--	----

90	91	92		
----	----	----	--	--

92	93			96
----	----	--	--	----

94	95	96		98
----	----	----	--	----

95		97		99
----	--	----	--	----



Number Sequence

Write the numbers that comes before the given number

