

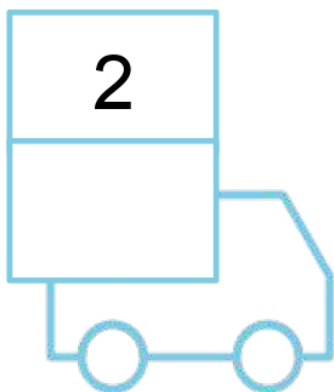


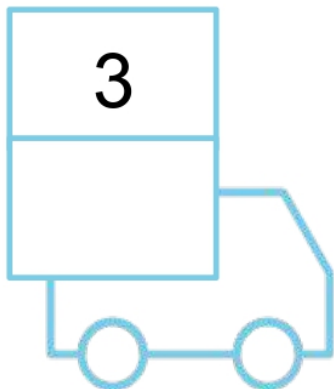

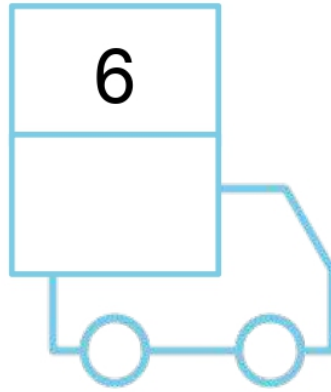
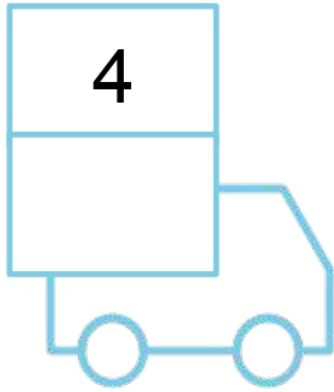




Number Sequence










Write the numbers that comes after the given number





Number Sequence










Write the numbers that comes before and after
the given numbers





Number Sequence

Write the numbers that comes before and after
the given numbers





Number Sequence

Write the numbers from small to big in the boxes

3	2	6
---	---	---

<

<

2	6	9
---	---	---

<

<

3	2	1
---	---	---

<

<

4	8	3
---	---	---

<

<

6	5	9
---	---	---

<

<

4	1	7
---	---	---

<

<



Number Sequence

Write the numbers from small to big in the boxes

3	7	1	5
---	---	---	---

<input type="text"/>	<	<input type="text"/>	<	<input type="text"/>	<	<input type="text"/>
----------------------	---	----------------------	---	----------------------	---	----------------------

1	3	2	6
---	---	---	---

<input type="text"/>	<	<input type="text"/>	<	<input type="text"/>	<	<input type="text"/>
----------------------	---	----------------------	---	----------------------	---	----------------------

5	2	7	4
---	---	---	---

<input type="text"/>	<	<input type="text"/>	<	<input type="text"/>	<	<input type="text"/>
----------------------	---	----------------------	---	----------------------	---	----------------------

9	5	2	4
---	---	---	---

<input type="text"/>	<	<input type="text"/>	<	<input type="text"/>	<	<input type="text"/>
----------------------	---	----------------------	---	----------------------	---	----------------------

6	2	8	5
---	---	---	---

<input type="text"/>	<	<input type="text"/>	<	<input type="text"/>	<	<input type="text"/>
----------------------	---	----------------------	---	----------------------	---	----------------------

6	2	8	5
---	---	---	---

<input type="text"/>	<	<input type="text"/>	<	<input type="text"/>	<	<input type="text"/>
----------------------	---	----------------------	---	----------------------	---	----------------------



Number Sequence

Write the missing numbers in the shapes to complete the sequence

5	6	7		9
---	---	---	--	---



2		3	4	5
---	--	---	---	---



6	7		9	10
---	---	--	---	----



1	2	3		5
---	---	---	--	---



4	5		7	8
---	---	--	---	---



3	4	5		7
---	---	---	--	---



1	2	3	4	
---	---	---	---	--











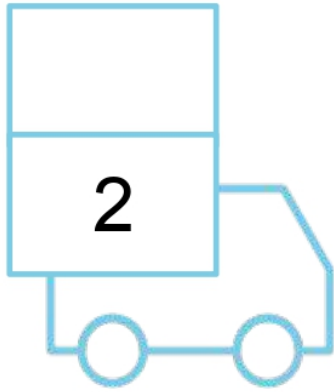
6		8	9	10
---	--	---	---	----





Number Sequence

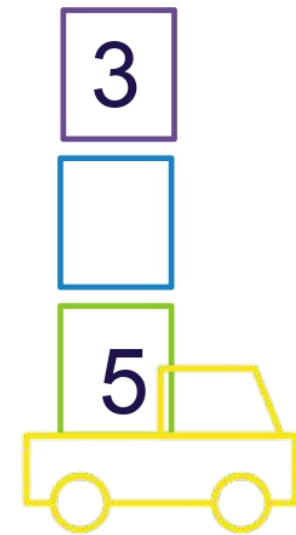
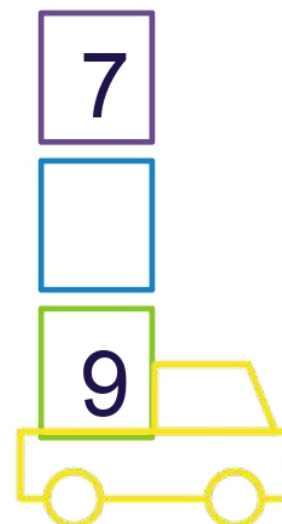
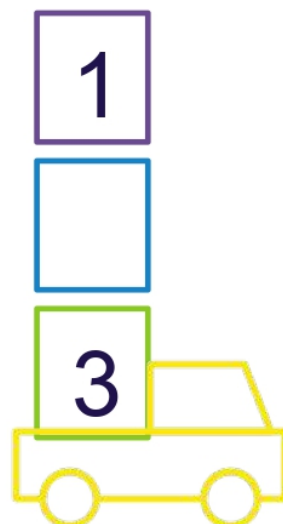
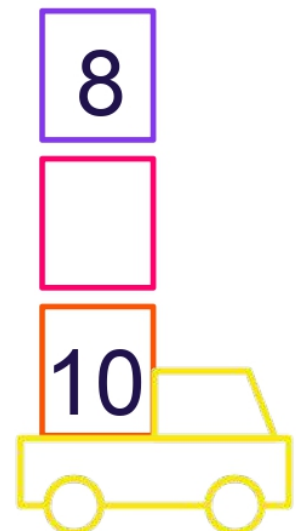
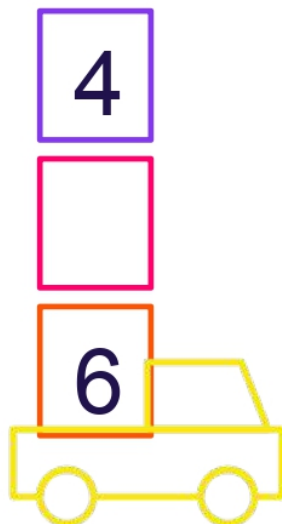
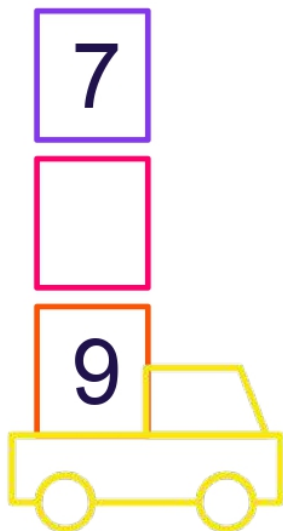
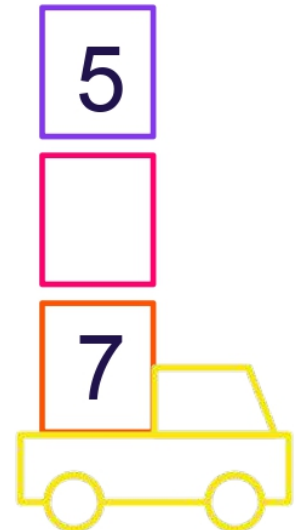
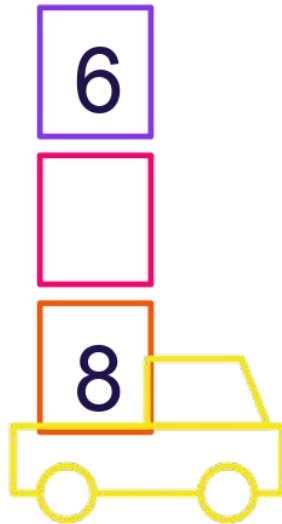
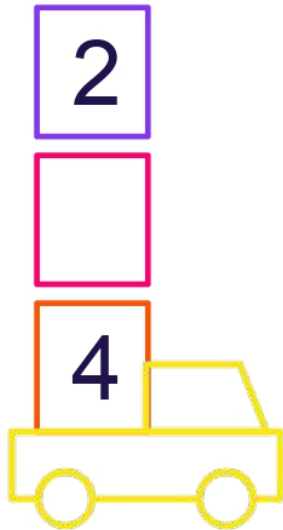
Write the numbers that comes before the given number





Number Sequence

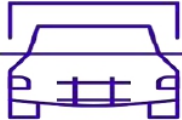
Write the numbers that comes in between the given numbers



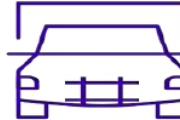



Number Sequence

Write the numbers that comes before and after the given numbers

























Number Sequence

Write the numbers from small to big in the circles



○	○	○	○
---	---	---	---

3	7	1	5
---	---	---	---



○	○	○	○
---	---	---	---

1	4	8	5
---	---	---	---



○	○	○	○
---	---	---	---

8	2	4	6
---	---	---	---



○	○	○	○
---	---	---	---

9	2	1	3
---	---	---	---



Number Sequence

Write the numbers from small to big in the boxes

3	2	6
---	---	---

<

<

2	6	9
---	---	---

<

<

3	2	1
---	---	---

<

<

4	8	3
---	---	---

<

<

6	5	9
---	---	---

<

<

4	1	7
---	---	---

<

<



Number Sequence

Write the numbers from small to big in the boxes

3	7	1	5
---	---	---	---

<input type="text"/>	<	<input type="text"/>	<	<input type="text"/>	<	<input type="text"/>
----------------------	---	----------------------	---	----------------------	---	----------------------

1	3	2	6
---	---	---	---

<input type="text"/>	<	<input type="text"/>	<	<input type="text"/>	<	<input type="text"/>
----------------------	---	----------------------	---	----------------------	---	----------------------

5	2	7	4
---	---	---	---

<input type="text"/>	<	<input type="text"/>	<	<input type="text"/>	<	<input type="text"/>
----------------------	---	----------------------	---	----------------------	---	----------------------

9	5	2	4
---	---	---	---

<input type="text"/>	<	<input type="text"/>	<	<input type="text"/>	<	<input type="text"/>
----------------------	---	----------------------	---	----------------------	---	----------------------

6	2	8	5
---	---	---	---

<input type="text"/>	<	<input type="text"/>	<	<input type="text"/>	<	<input type="text"/>
----------------------	---	----------------------	---	----------------------	---	----------------------

6	2	8	5
---	---	---	---

<input type="text"/>	<	<input type="text"/>	<	<input type="text"/>	<	<input type="text"/>
----------------------	---	----------------------	---	----------------------	---	----------------------



Number Sequence

Write the missing numbers to complete the sequence

1	2		4	
---	---	--	---	--

	7	8	9	
--	---	---	---	--

2	3		5	
---	---	--	---	--

6	7	8		
---	---	---	--	--

5		7	8	
---	--	---	---	--

3	4			7
---	---	--	--	---


2		4	5	
---	--	---	---	--

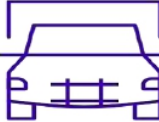
5	6	7		
---	---	---	--	--

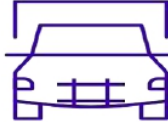


Number Sequence

Write the numbers that comes before and after
the given numbers






















Number Sequence

Write the numbers that comes before and after
the given numbers

