



Addition Keywords

Read and write the keywords and the addition symbol


Keyword

Write It

Symbol


Add

Two horizontal lines for writing the keyword.




Plus

Two horizontal lines for writing the keyword.




Sum

Two horizontal lines for writing the keyword.




Total

Two horizontal lines for writing the keyword.




In All

Two horizontal lines for writing the keyword.



All Together

Two horizontal lines for writing the keyword.





Addition Word Problems

Read the question and write the correct answer

John has 2 fishes as his pet. He then got 2 more fishes from the shop. How many fishes does John have in total now?



Write the keyword used for addition here

Ron finds 5 frogs in a pond and he finds 3 more frogs in another pond. How many frogs are there in all?









Write the keyword used for addition here



Addition Word Problems







Read the question and write the correct answer

Tanya spotted 3 seahorses first and then she spotted 3 more seahorses. How many seahorses did Tanya spot in total?

 +  = 
 +  = 
 + =

Write the keyword used for addition here

Isha added 3 carrots to her basket plus 2 brinjal. How many vegetables did Isha get?

 +  = 
 +  = 
 + =







Write the keyword used for addition here



Addition Word Problems




Read the question and write the correct answer

Sam finds 2 ducks in one pond and 3 more ducks in another pond. All together how many ducks did sam find?

 +  = 
 +  = 
 + =

Write the keyword used for addition here

My mom got me 1 ice cream and got 1 ice cream for herself.
How many ice cream did my mom get in all?

 +  = 
 + =

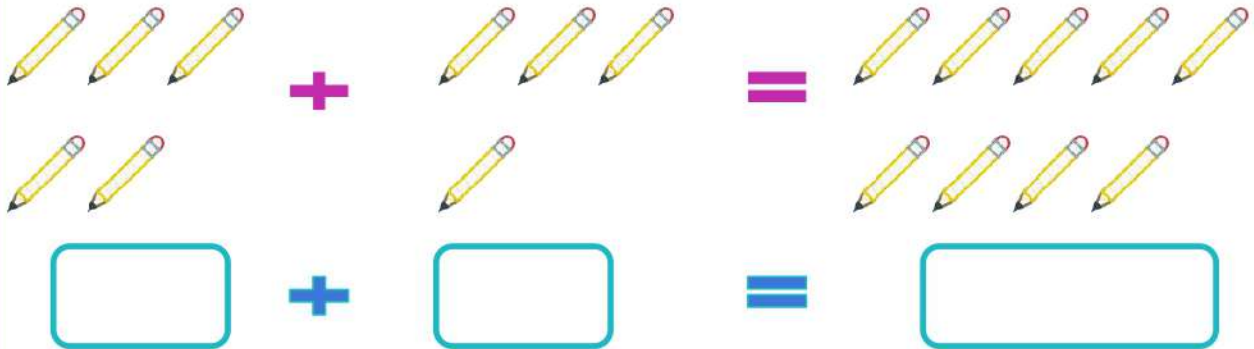
Write the keyword used for addition here



Addition Word Problems

Read the question and write the correct answer

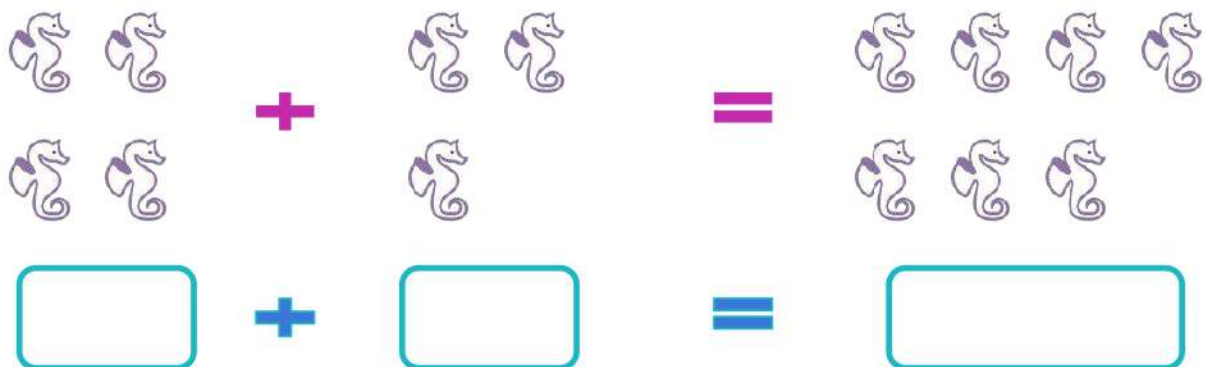
Seema got 5 pencils to the classroom. Ron got 4 pencils to the Classroom. In total how many pencils did they get?



$5 + 4 = 9$

Write the keyword used for addition here

Aanya spotted 4 seahorses first and then she spotted 3 more seahorses. How many shehorses did Aanya spot in total?



$4 + 3 = 7$

Write the keyword used for addition here



Addition Word Problems

Read the question and write the correct answer

I got 1 present from my mom and got 1 present from my friend. How many presents did I get ?

A box contains 7 bars of white chocolate and 2 bars of dark chocolate. How many bars of chocolate does the box have in total?

There are 5 frogs on a log. 3 more frogs jumped onto the log. How many frogs are on the log?

$3 + 2$

$1 + 1$

$7 + 2$

$5 + 3$

$3 + 7$



Addition Word Problems

Read the question and write the correct answer

Tom ate 2 cakes first. He then ate 4 more cakes. How many Cakes did he eat?

There were 2 dogs in the park. 2 more dogs came to the park. How many dogs are there in total?

My mom put 6 vanilla cookies in the jar plus 4 more chocolate cookies. How many cookies are there altogether?

$6 + 4$

$1 + 1$

$2 + 4$

$2 + 2$


$1 + 4$



Addition Word Problems

Read the question and write the correct answer

I see 7 ducks in the pond. 4 more ducks get in the pond. How many ducks are in the pond all together?






Addition Word Problems

Read the question and write the correct answer

Max picks 5 cupcakes from the shop. Sam picks 6 cupcakes from another cake shop. How many cupcakes did they get in all?





Addition Word Problems

Read the question and write the correct answer

Alia added 7 oranges to her basket while buying fruits at the market. She then added 3 apples to her basket.

Cut and paste the pictures to complete the Frame




Write the equation

_____ + _____ = _____

All combined how many fruits did alia pick ? _____

Write the keyword used for addition : _____





Addition Word Problems

Read the question and write the correct answer

Alia added 5 bunch of grapes to her basket while buying fruits at the market. She then added 5 pineapples to her basket.

Cut and paste the pictures to complete the Frame

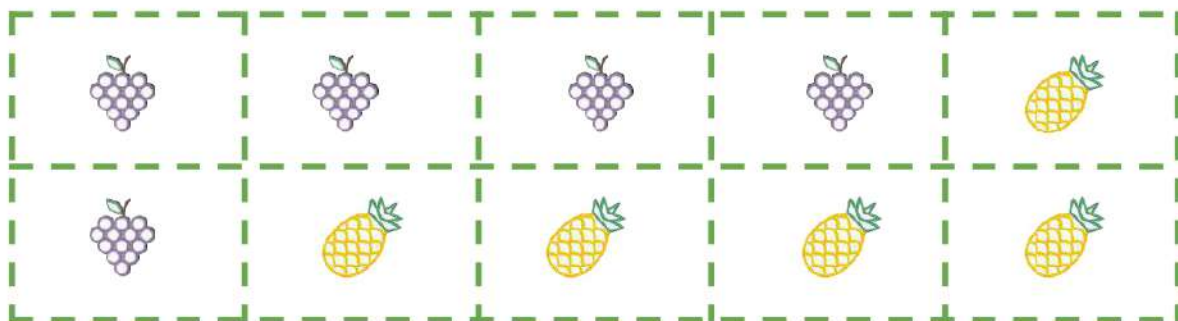


Write the equation

_____ + _____ = _____

All combined how many fruits did Alia add ? _____

Write the keyword used for addition : _____





Addition Word Problems

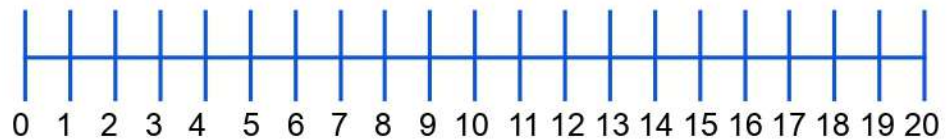
Read the question and write the correct answer

He added 5 fruits to the basket. The basket was increased by adding 5 more fruits.

Keyword

Frame

Number
Line



Write the equation

_____ + _____ = _____

How many fruits does the basket have? _____

Write the keyword used for addition : _____



Addition Word Problems

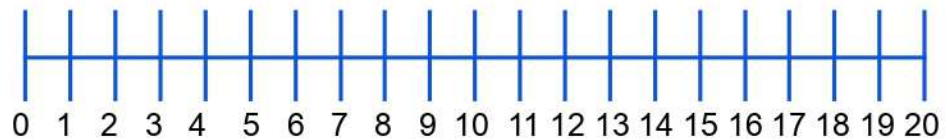
Read the question and write the correct answer

The monkey ate 4 bananas first. Later it ate 5 more bananas. How many bananas did the monkey eat in total?

Keyword

Frame

Number
Line



Write the equation

_____ + _____ = _____

How many bananas did the monkey eat in total? _____

Write the keyword used for addition : _____



Addition Word Problems

Read the question and write the correct answer

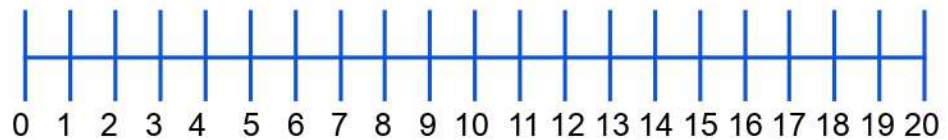
My mom made a big pizza. She gave me 2 slices to eat.

She gave my brother 2 slices to eat. Both of us put together, how many slices did we eat?

Keyword

Frame

Number
Line



Write the equation

_____ + _____ = _____

How many slices of pizza did we eat together? _____

Write the keyword used for addition : _____



Addition Word Problems

Read the question and write the correct answer

My mom has 4 blue color dresses and my dad has 5 blue color shirts. They ironed all them together and kept it in the closet. How many Blue clothes does my mom and dad have together?

$$\boxed{} + \boxed{} = \boxed{}$$

Write the keyword used for addition here ?

My friend got me 5 cupcakes while coming home. I ate 3 cupcakes and he ate 2 cupcakes. How many cupcakes did we eat in total?

$$\boxed{} + \boxed{} = \boxed{}$$

Write the keyword used for addition here ?



Addition Word Problems

Read the question and write the correct answer

Shiv had 2 cats as his pet. He then got 2 more cats from the shop.

How many cats does Shiv have all together now?

$$\boxed{} + \boxed{} = \boxed{}$$

Write the keyword used for addition here ?

Sheena found 5 ants in her garden. Tom helped her find 3 more ants in the garden. How many total ants did they find ?

$$\boxed{} + \boxed{} = \boxed{}$$

Write the keyword used for addition here ?



Addition Word Problems

Read the question and write the correct answer

Tim bursted 3 crackers. He wanted to burst more so he started to burst 1 more cracker. So far what is the sum of crackers that Tim bursted?

$$\boxed{} + \boxed{} = \boxed{}$$

Write the keyword used for addition here ?

Tom had 4 toys and Tim had 3 toys. They dropped all their toys together into the toy basket.

How many toys does the basket have in all?

$$\boxed{} + \boxed{} = \boxed{}$$

Write the keyword used for addition here ?



Addition Word Problems

Read the question and write the correct answer

My brother spotted 4 ships sailing in the sea. My sister spotted 3 Ships sailing in the ocean.

How many ships did they spot together?

$$\boxed{} + \boxed{} = \boxed{}$$

Write the keyword used for addition here ?

Seema added 4 toys in her toy basket. Tina added 4 more toys to the same toy basket.

How many toys does the toy basket have altogether?

$$\boxed{} + \boxed{} = \boxed{}$$

Write the keyword used for addition here ?