



Compare and Write

Count and write the number of boxes in the stack.

Compare and write the greater-than or lesser-than symbol

10 > 8

8 < 10

8 < 10

10 > 8

8 < 10

8 < 10



Compare and Write

Count and write the number of objects.

Compare and circle the correct greater-than or lesser-than keyword and write the symbol

Greater Than
Lesser Than

Greater Than
Lesser Than

Greater Than
Lesser Than

Greater Than
Lesser Than

Greater Than
Lesser Than



Quantity Discrimination

Compare and write the greater-than or lesser-than symbol

13 17

18 14

19 20

16 15

15 13

12 13

11 12

12 18

14 18

16 19

20 13

17 14

15 14

16 17



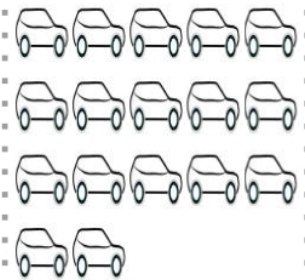



More or Less ?

Cut, sort and paste the pictures in the right box

More





Less





Compare and Color




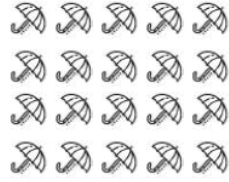
Count and color the shape that is more in number

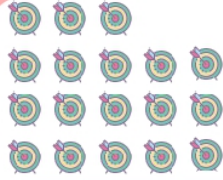












Compare and Find





Write the number of objects in the pink box.
Color the objects in the blue box to match the highest /
biggest number and write it

 <input type="text"/>	 <input type="text"/>	 <input type="text"/>	 <input type="text"/>
---	---	--	---

 <input type="text"/>	 <input type="text"/>	 <input type="text"/>	 <input type="text"/>
---	---	--	---

 <input type="text"/>	 <input type="text"/>	 <input type="text"/>	 <input type="text"/>
---	---	--	---

 <input type="text"/>	 <input type="text"/>	 <input type="text"/>	 <input type="text"/>
---	---	--	---

 <input type="text"/>	 <input type="text"/>	 <input type="text"/>	 <input type="text"/>
---	---	--	---



Compare and Write

Count and write the numbers in the box.

Compare and write the greater-than or lesser-than symbol

12 umbrellas 6 earrings

12 cupcakes 15 bells

12 crabs 12 faces

18 butterflies 15 teddy bears



Compare and Write

Count and write the number of boxes in the stack.
Compare and write the greater-than or lesser-than symbol



Quantity Discrimination

Compare and write the greater-than or lesser-than symbol

12 13

17 13

15 13

19 20

14 18

11 16

15 13

12 19

19 16

18 13

12 17

15 16



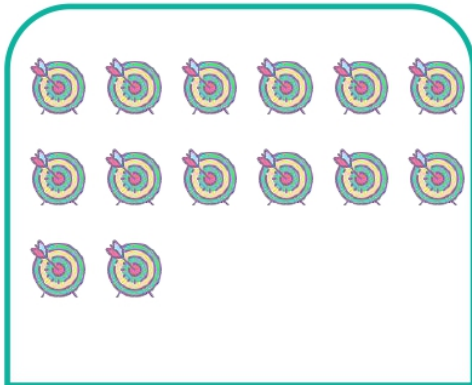

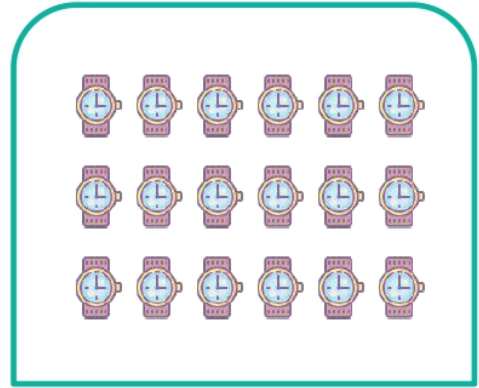

20 13

13 17



Greater or Lesser









Color the right greater-than or lesser-than symbol





Greater or Lesser



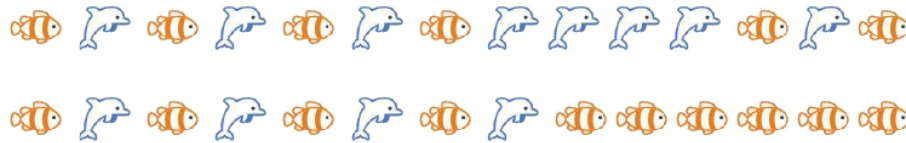

Write the correct greater-than or lesser-than symbol





Compare and Color

Count and color the shape that is more in number





Compare and Find

Write the number of objects in the yellow box.
Color the objects in the blue box to match the
lowest / smallest number and write it

 <input type="text"/>	 <input type="text"/>	 <input type="text"/>	 <input type="text"/>
--------------------------	--------------------------	--------------------------	--------------------------

 <input type="text"/>	 <input type="text"/>	 <input type="text"/>	 <input type="text"/>
--------------------------	--------------------------	--------------------------	--------------------------

 <input type="text"/>	 <input type="text"/>	 <input type="text"/>	 <input type="text"/>
--------------------------	--------------------------	--------------------------	--------------------------

 <input type="text"/>	 <input type="text"/>	 <input type="text"/>	 <input type="text"/>
--------------------------	--------------------------	--------------------------	--------------------------

 <input type="text"/>	 <input type="text"/>	 <input type="text"/>	 <input type="text"/>
--------------------------	--------------------------	--------------------------	--------------------------



Compare and Write

Count and write the numbers in the box.

Compare and write the greater-than or lesser-than symbol

15 squirrels 18 watches

15 stars 15 paper airplanes

18 unicorns 15 bows

11 cups of tea 18 plates



Compare and Write

Count and write the number of objects.

Compare and circle the correct greater-than or lesser-than keyword and write the symbol

Greater Than
Lesser Than

Greater Than
Lesser Than

Greater Than
Lesser Than

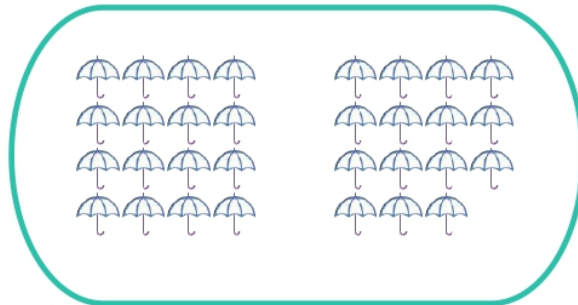



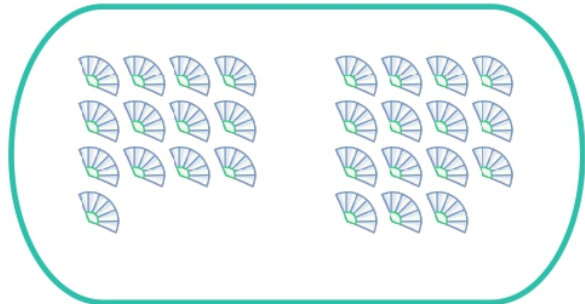

Greater Than
Lesser Than

Greater Than
Lesser Than



Compare And Circle

Circle the group that has more number of pictures





Greater or Lesser

Color the right greater-than or lesser-than symbol

<table border="1"><tr><td>♠</td><td>♠</td><td>♠</td><td>♠</td><td>♠</td></tr><tr><td>♠</td><td>♠</td><td>♠</td><td>♠</td><td>♠</td></tr></table>	♠	♠	♠	♠	♠	♠	♠	♠	♠	♠	<table border="1"><tr><td>♠</td><td>♠</td><td>♠</td><td>♠</td><td>♠</td></tr><tr><td>♠</td><td>♠</td><td>♠</td><td>♠</td><td>♠</td></tr></table>	♠	♠	♠	♠	♠	♠	♠	♠	♠	♠	<table border="1"><tr><td>♠</td><td>♠</td><td>♠</td><td>♠</td><td>♠</td></tr><tr><td>♠</td><td>♠</td><td>♠</td><td>♠</td><td>♠</td></tr></table>	♠	♠	♠	♠	♠	♠	♠	♠	♠	♠	<table border="1"><tr><td>♠</td><td>♠</td><td>♠</td><td>♠</td><td>♠</td></tr><tr><td>♠</td><td>♠</td><td>♠</td><td>♠</td><td>♠</td></tr></table>	♠	♠	♠	♠	♠	♠	♠	♠	♠	♠
♠	♠	♠	♠	♠																																							
♠	♠	♠	♠	♠																																							
♠	♠	♠	♠	♠																																							
♠	♠	♠	♠	♠																																							
♠	♠	♠	♠	♠																																							
♠	♠	♠	♠	♠																																							
♠	♠	♠	♠	♠																																							
♠	♠	♠	♠	♠																																							
	<table border="1"><tr><td>♠</td><td>♠</td><td>♠</td><td>♠</td><td>♠</td></tr><tr><td>♠</td><td>♠</td><td>♠</td><td>♠</td><td></td></tr></table>	♠	♠	♠	♠	♠	♠	♠	♠	♠		<table border="1"><tr><td>♠</td><td>♠</td><td>♠</td><td>♠</td><td>♠</td></tr><tr><td>♠</td><td>♠</td><td>♠</td><td>♠</td><td>♠</td></tr></table>	♠	♠	♠	♠	♠	♠	♠	♠	♠	♠																					
♠	♠	♠	♠	♠																																							
♠	♠	♠	♠																																								
♠	♠	♠	♠	♠																																							
♠	♠	♠	♠	♠																																							

<table border="1"><tr><td>♠</td><td>♠</td><td>♠</td><td>♠</td><td>♠</td></tr><tr><td>♠</td><td>♠</td><td>♠</td><td>♠</td><td>♠</td></tr></table>	♠	♠	♠	♠	♠	♠	♠	♠	♠	♠	<table border="1"><tr><td>♠</td><td>♠</td><td>♠</td><td>♠</td><td>♠</td></tr><tr><td>♠</td><td>♠</td><td>♠</td><td>♠</td><td>♠</td></tr></table>	♠	♠	♠	♠	♠	♠	♠	♠	♠	♠	<table border="1"><tr><td>♠</td><td>♠</td><td>♠</td><td>♠</td><td>♠</td></tr><tr><td>♠</td><td>♠</td><td>♠</td><td>♠</td><td>♠</td></tr></table>	♠	♠	♠	♠	♠	♠	♠	♠	♠	♠	<table border="1"><tr><td>♠</td><td>♠</td><td>♠</td><td>♠</td><td>♠</td></tr><tr><td>♠</td><td>♠</td><td>♠</td><td>♠</td><td>♠</td></tr></table>	♠	♠	♠	♠	♠	♠	♠	♠	♠	♠
♠	♠	♠	♠	♠																																							
♠	♠	♠	♠	♠																																							
♠	♠	♠	♠	♠																																							
♠	♠	♠	♠	♠																																							
♠	♠	♠	♠	♠																																							
♠	♠	♠	♠	♠																																							
♠	♠	♠	♠	♠																																							
♠	♠	♠	♠	♠																																							
	<table border="1"><tr><td>♠</td><td>♠</td><td>♠</td><td></td><td></td></tr><tr><td></td><td></td><td></td><td></td><td></td></tr></table>	♠	♠	♠								<table border="1"><tr><td>♠</td><td>♠</td><td>♠</td><td>♠</td><td>♠</td></tr><tr><td>♠</td><td></td><td></td><td></td><td></td></tr></table>	♠	♠	♠	♠	♠	♠																									
♠	♠	♠																																									
♠	♠	♠	♠	♠																																							
♠																																											











<table border="1"><tr><td>♠</td><td>♠</td><td>♠</td><td>♠</td><td>♠</td></tr><tr><td>♠</td><td>♠</td><td>♠</td><td>♠</td><td>♠</td></tr></table>	♠	♠	♠	♠	♠	♠	♠	♠	♠	♠	<table border="1"><tr><td>♠</td><td>♠</td><td>♠</td><td>♠</td><td>♠</td></tr><tr><td>♠</td><td>♠</td><td>♠</td><td>♠</td><td>♠</td></tr></table>	♠	♠	♠	♠	♠	♠	♠	♠	♠	♠	<table border="1"><tr><td>♠</td><td>♠</td><td>♠</td><td>♠</td><td>♠</td></tr><tr><td>♠</td><td>♠</td><td>♠</td><td>♠</td><td>♠</td></tr></table>	♠	♠	♠	♠	♠	♠	♠	♠	♠	♠	<table border="1"><tr><td>♠</td><td>♠</td><td>♠</td><td>♠</td><td>♠</td></tr><tr><td>♠</td><td>♠</td><td></td><td></td><td></td></tr></table>	♠	♠	♠	♠	♠	♠	♠			
♠	♠	♠	♠	♠																																							
♠	♠	♠	♠	♠																																							
♠	♠	♠	♠	♠																																							
♠	♠	♠	♠	♠																																							
♠	♠	♠	♠	♠																																							
♠	♠	♠	♠	♠																																							
♠	♠	♠	♠	♠																																							
♠	♠																																										
	<table border="1"><tr><td>♠</td><td>♠</td><td>♠</td><td>♠</td><td></td></tr><tr><td></td><td></td><td></td><td></td><td></td></tr></table>	♠	♠	♠	♠							<table border="1"><tr><td>♠</td><td>♠</td><td>♠</td><td>♠</td><td>♠</td></tr><tr><td>♠</td><td>♠</td><td></td><td></td><td></td></tr></table>	♠	♠	♠	♠	♠	♠	♠																								
♠	♠	♠	♠																																								
♠	♠	♠	♠	♠																																							
♠	♠																																										











<table border="1"><tr><td>♠</td><td>♠</td><td>♠</td><td>♠</td><td>♠</td></tr><tr><td>♠</td><td>♠</td><td>♠</td><td>♠</td><td>♠</td></tr></table>	♠	♠	♠	♠	♠	♠	♠	♠	♠	♠	<table border="1"><tr><td>♠</td><td>♠</td><td>♠</td><td>♠</td><td>♠</td></tr><tr><td>♠</td><td>♠</td><td>♠</td><td>♠</td><td>♠</td></tr></table>	♠	♠	♠	♠	♠	♠	♠	♠	♠	♠	<table border="1"><tr><td>♠</td><td>♠</td><td>♠</td><td>♠</td><td>♠</td></tr><tr><td>♠</td><td>♠</td><td>♠</td><td>♠</td><td>♠</td></tr></table>	♠	♠	♠	♠	♠	♠	♠	♠	♠	♠	<table border="1"><tr><td>♠</td><td>♠</td><td>♠</td><td>♠</td><td>♠</td></tr><tr><td>♠</td><td></td><td></td><td></td><td></td></tr></table>	♠	♠	♠	♠	♠	♠				
♠	♠	♠	♠	♠																																							
♠	♠	♠	♠	♠																																							
♠	♠	♠	♠	♠																																							
♠	♠	♠	♠	♠																																							
♠	♠	♠	♠	♠																																							
♠	♠	♠	♠	♠																																							
♠	♠	♠	♠	♠																																							
♠																																											
	<table border="1"><tr><td>♠</td><td>♠</td><td></td><td></td><td></td></tr><tr><td></td><td></td><td></td><td></td><td></td></tr></table>	♠	♠									<table border="1"><tr><td>♠</td><td></td><td></td><td></td><td></td></tr><tr><td></td><td></td><td></td><td></td><td></td></tr></table>	♠																														
♠	♠																																										
♠																																											























Greater or Lesser

Color the right greater-than or lesser-than symbol

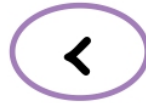
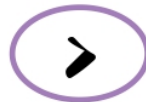
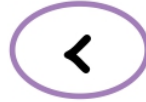
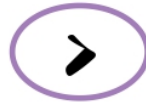
		
		
		
		



Greater or Lesser









Color the right greater-than or lesser-than symbol





Greater or Lesser

Write the correct greater-than or lesser-than symbol




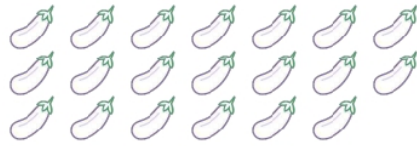




Compare and Find

Count and write the number for each group.

Choose and write the correct answer from the options





Compare and Find

Count and write the number.











Choose and write the correct answer from the options





Compare And Circle

Circle the group that has more number of dots









More or Less ?

Cut, sort and paste the pictures in the right box

More

Less






Greater or Lesser


Write the correct greater-than or lesser-than symbol.

Color the number and shapes


12




18




13



17



14





Greater or Lesser

Write the correct greater-than or lesser-than symbol.

Color the number and shapes

11 ○



20 ○



16 ○



19 ○



15 ○





Compare and Color

Count and color the shape that is more in number



Greater or Lesser

Write the correct greater-than or lesser-than symbol

