



Addition Keywords


Read and write the keywords and the addition symbol

Keyword


Write It

Symbol


Add




Plus




Sum




Total



In All



All Together





Addition Word Problems

Read the question and write the correct answer

Milo had 10 ice creams. His friend got 10 ice creams.
How much in total do they have?

Draw the frame

Write place value

	T	U
	1	0
+	1	0
=	2	0

Write the keyword used for addition

Answer



Addition Word Problems

Read the question and write the correct answer

Nina ate 5 chocolates in the morning and 5 in the evening. How many chocolates did she eat in total?

Draw the frame

Write place value

	T	U

+
=

Write the keyword used for addition

Answer



Addition Word Problems

Read the question and write the correct answer

Lula had 8 red lollipops and 9 blue lollipops. How many lollipops did she have all together?

Draw place value blocks



T	U

TOTAL



Addition Word Problems

Read the question and write the correct answer

Nana gave 14 rotis to ram and 3 rotis to shyam. In total how many rotis did nana make?

Frame

Place Value

T	U

+
=

Write the equation

_____ + _____ = _____

How many rotis did Nana make? _____

Write the keyword used for addition : _____



Addition Word Problems

Read the question and write the correct answer

There were 9 white pigs and 9 black pigs in the sty.
What is the sum of pigs in the sty?

Frame

Place Value

T	U

+
=

Write the equation

_____ + _____ = _____

What is the sum of pigs in the sty? _____

Write the keyword used for addition : _____



Addition Word Problems

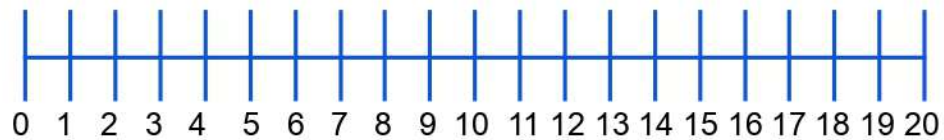
Read the question and write the correct answer

Sana had 6 toys. Her mother bought 10 more toys for her birthday. How many toys does Sana have in total?

Keyword

Frame

Number
Line



Write the equation

_____ + _____ = _____

How many toys does Sana have in total? _____

Write the keyword used for addition : _____



Addition Word Problems

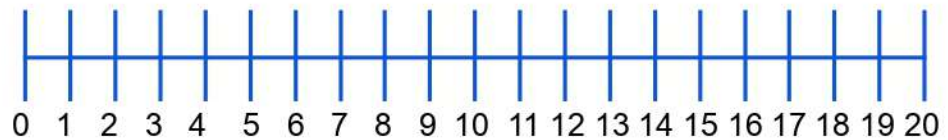
Read the question and write the correct answer

Santa gave presents to 10 boys and 7 girls. How many children did he give presents all together?

Keyword

Frame

Number
Line



Write the equation

_____ + _____ = _____

How many children did Santa give gifts to? _____

Write the keyword used for addition : _____



Addition Word Problems

Read the question and write the correct answer

10 children came to school in the bus, while 10 children were dropped by their parents. How many total children came to school?

T	U

+

=

Write the keyword used for addition

Betty had 7 cats and 7 dogs. How many pets did she have all together in her house?

T	U

+

=

Write the keyword used for addition



Addition Word Problems

Read the question and write the correct answer

There were 11 cars in the parking. 4 more cars joined later. All together how many cars are there in the parking now?

Draw the frame

Write place value

	T	U

+
=

Write the keyword used for addition

Answer



Addition Word Problems

Read the question and write the correct answer

12 parrots were sitting on a tree. 2 crows flew from another tree and sat on this tree. What is the sum of birds on the tree now?

Draw the frame

Write place value

	T	U

+
=

Write the keyword used for addition

Answer



Addition Word Problems

Read the question and write the correct answer

John threw 8 stones in the pond. He gathered 2 more stones and threw them in. How many total stones did John throw in the pond?

Anna gave 12 carrots to Sven the deer. Kristof gave another 6 carrots to Sven. How many carrots did Sven eat all together?

Blossom captured 5 villains and Buttercup captured 4 villains. In total how many villains did the Powerpuff Girls capture?

$5 + 4$

$8 + 2$

$1 + 4$

$5 + 3$

$12 + 6$



Addition Word Problems

Read the question and write the correct answer

While chasing jerry, tom broke 15 tea cups. Jerry broke 1 more cup while running. What is the sum of the cups both of them broke?

Juno made 1 snow cone. His little brother made 9 more snow cones. In total how many snow cones did they both make?

There were 3 lions in the zoo. Next to them there were 6 tigers. How many lions and tigers were there in total?

$1 + 9$

$6 + 1$

$3 + 6$

$15 + 1$

$5 + 4$



Addition Word Problems

Read the question and write the correct answer

The hen laid 14 eggs on monday and 5 eggs on friday.
In total, how many eggs did the hen lay?

Draw place value blocks



T	U

TOTAL



Addition Word Problems

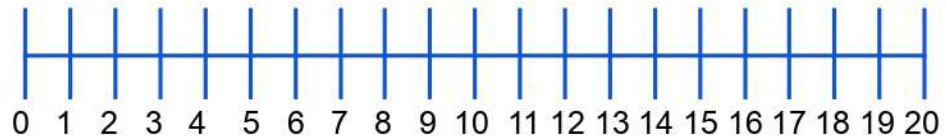
Read the question and write the correct answer

Sam bowled 12 balls to Rudy. Then Tom bowled another 5 balls to Rudy. How many total balls did Rudy face?

Addition Keyword

Frame

Number
Line



Write the equation

_____ + _____ = _____

How many balls did Rudy face? _____

Write the keyword used for addition : _____



Addition Word Problems

Read the question and write the correct answer

Jack made 10 kites and gave it to his friends. He then made 5 more kites for himself. How many kites did he make all together?

T	U

+

=

Write the keyword used for addition

8 ducks were swimming in the pond. 6 frogs were sitting on the banks and watching them. How many ducks and frogs were in the pond in total?

T	U

+

=

Write the keyword used for addition



Addition Word Problems

Read the question and write the correct answer

10 butterflies were sitting on red flowers. 9 butterflies were sitting on yellow flowers. In total how many butterflies were there in the garden?

T	U

+

=

Write the keyword used for addition

There are 3 swings in the park where children were sitting. 3 swings were empty. What is the sum of swings in the park?

T	U

+

=

Write the keyword used for addition



Addition Word Problems

Read the question and write the correct answer

There were 18 apples and 1 orange on the table for breakfast. What is the sum of fruits on the table?

T	U

+
=

Write the keyword used for addition

The blue spaceship carried 9 aliens while the red spaceship carried 10 aliens. All together how many aliens were there in the spaceships?

T	U

+
=

Write the keyword used for addition