



# Subtraction Keywords


Read and write the keywords and the subtraction symbol

**Keyword**


**Write It**

**Symbol**


Minus


Left


Subtract


Take Away

Remaining

Reduced



# Subtraction Word Problems

Read the question and write the correct answer

Max picked 15 apples from the tree. Sam took 5 of them to the market. How many apples are Max left with?

Draw place value blocks

—

=

—

=

T	U

TOTAL



# Subtraction Word Problems

Read the question and write the correct answer

Alia added 17 oranges to her basket while buying fruits at the market. But 2 were rotten and she took them out. How many oranges are left in the basket now?

Frame



Place Value

	T	U

—

=

Write the equation

\_\_\_\_\_ - \_\_\_\_\_ = \_\_\_\_\_

How many Oranges are left in Alia's basket? \_\_\_\_\_

Write the keyword used for subtraction : \_\_\_\_\_



# Subtraction Word Problems

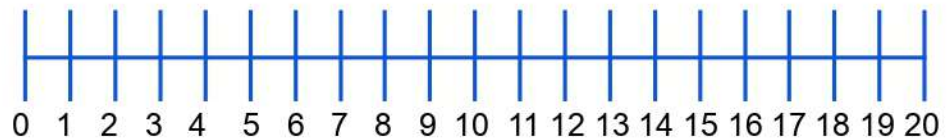
Read the question and write the correct answer

He added 15 fruits to the basket. The basket was reduced by taking away 5 fruits.

Keyword Used

Frame


Number  
Line



Write the equation

\_\_\_\_\_ - \_\_\_\_\_ = \_\_\_\_\_

How many fruits does the basket have? \_\_\_\_\_

Write the keyword used for subtraction: \_\_\_\_\_



# Subtraction Word Problems

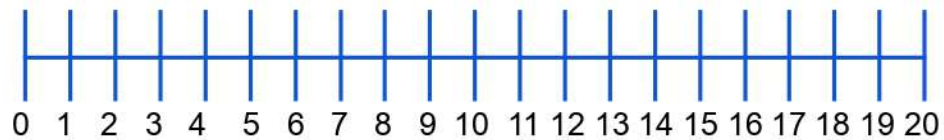
Read the question and write the correct answer

She took 12 balls for tennis practice. She hit 2 of them away. How many balls are remaining with her?

Keyword

Frame


Number  
Line



Write the equation

\_\_\_\_\_ - \_\_\_\_\_ = \_\_\_\_\_

How many balls are remaining with her? \_\_\_\_\_

Write the keyword used for subtraction: \_\_\_\_\_



# Subtraction Word Problems

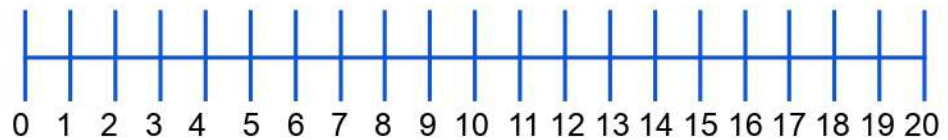
Read the question and write the correct answer

My mom made a big pizza with 16 slices. She gave me 3 slices to eat. Now how many slices is the pizza reduced to?

Keyword

Frame


Number  
Line



Write the equation

\_\_\_\_\_ - \_\_\_\_\_ = \_\_\_\_\_

How many slices of pizza are left ? \_\_\_\_\_

Write the keyword used for subtraction: \_\_\_\_\_



# Subtraction Word Problems

Read the question and write the correct answer

There are 16 lessons for Ravi to study. He completed 10 lessons. How many lessons are remaining?

T	U

—

=

Write the keyword used for subtraction

Savi had 18 balloons with him. His friend burst 11 of them. How many balloons is Savi left with?

T	U

—

=

Write the keyword used for subtraction



# Subtraction Word Problems

Read the question and write the correct answer

I took 19 pencils to class. I gave 5 pencils to my friend. How many pencils are remaining with me?

Draw the frame


Write place value

	T	U

—

=

Write the keyword used for subtraction

Answer





# Subtraction Word Problems

Read the question and write the correct answer

Sana had 15 pair of socks. 3 of them were worn out and she threw them away. How many pair of socks are remaining with her?

Draw the frame


Write place value

	T	U

—

=

Write the keyword used for subtraction

Answer



# Subtraction Word Problems

Read the question and write the correct answer

Tom carried 17 cakes to the party. His friends ate 14 of them. How many cakes are left now?

There were 18 dogs in the park. 12 of them left after playing. How many dogs are remaining in the park?

My mom put 15 vanilla cookies to the jar. She gave 4 cookies to Nina. How many cookies are left in the jar?

$15 - 4$

$10 - 5$

$18 - 12$

$17 - 14$

$15 - 5$



# Subtraction Word Problems

Read the question and write the correct answer

I saw 17 ducks in the pond. 3 of them were black in color and the rest were yellow. How many ducks are yellow in color?

Draw place value blocks

—

=

—

=

T	U

TOTAL



# Subtraction Word Problems

Read the question and write the correct answer

The jug had 15 litres of water. Everyone drank 3 litres of water during lunch. How much litres of water is the jug reduced to?

T	U

—

==

Write the keyword used for subtraction

If you minus 12 from 19, what is the answer?

T	U

—

==

Write the keyword used for subtraction



# Subtraction Word Problems

Read the question and write the correct answer

Seema drew 14 paintings during her holidays. She lost 4 of them. How many paintings are remaining with her to take to school?

T	U

—  
=

Write the keyword used for subtraction

Arjun wrote 16 lines of poem. He rubbed 2 lines out of that as it had a mistake. How many lines of poem are left?

T	U

—  
=

Write the keyword used for subtraction



# Subtraction Word Problems

Read the question and write the correct answer

Ravi had 18 arrows with him. He shot 6 of them using his bow. How many arrows are left now with Ravi?

Draw the frame


Write place value

	T	U

—

=

Write the keyword used for subtraction

Answer



# Subtraction Word Problems

Read the question and write the correct answer

Sana added 19 juice packs to her basket. Her brother took 4 of them away. How many juice packs are remaining in the basket?

Frame



Place Value

T	U

—

=

Write the equation

\_\_\_\_\_ - \_\_\_\_\_ = \_\_\_\_\_

How many juice packs are remaining ? \_\_\_\_\_

Write the keyword used for subtraction: \_\_\_\_\_



# Subtraction Word Problems

Read the question and write the correct answer

Jon has 19 fishes in his net. He sold 4 of them in the market and took the rest home. How many fishes he took home?

T	U

—

=

Write the keyword used for subtraction

Ron finds 18 frogs on a log in a pond. 7 of them dive inside the water. How many frogs are remaining on the log?

T	U

—

=

Write the keyword used for subtraction





# Subtraction Word Problems

Read the question and write the correct answer

My mom got 16 ice creams for me and I ate 1 ice cream. How many ice creams are left now?

Draw the frame


Write place value

	T	U
	1	6
-		1
=	1	5

Write the keyword used for subtraction

Answer



# Subtraction Word Problems

Read the question and write the correct answer

I got 16 presents from my mom and I gave away 11 presents to other children in my street. How many presents are remaining with me ?

Sam scored 19 marks in the test. Ron scored 15 marks. What is the difference in scores between the two of them?

There were 14 birds in the tree. 13 of them flew to another tree. How many birds are left in this tree now?

$16 - 11$

$19 - 15$

$14 - 13$

$19 - 15$

$16 - 14$