



# Number Names

Write the missing numbers

431	432	433				437	437		
-----	-----	-----	--	--	--	-----	-----	--	--

491					496				500
-----	--	--	--	--	-----	--	--	--	-----

681	682	683	684						
-----	-----	-----	-----	--	--	--	--	--	--

761	762			765	766				770
-----	-----	--	--	-----	-----	--	--	--	-----

821	822	823	824					829	
-----	-----	-----	-----	--	--	--	--	-----	--



# Number Names

Write the missing numbers

191	192				196	197			200
-----	-----	--	--	--	-----	-----	--	--	-----

361	362	363	364						370
-----	-----	-----	-----	--	--	--	--	--	-----

881	882			885			888		
-----	-----	--	--	-----	--	--	-----	--	--

711	712			715	716			719	720
-----	-----	--	--	-----	-----	--	--	-----	-----

391	392	393	394						400
-----	-----	-----	-----	--	--	--	--	--	-----



# Number Names

Write the missing numbers

511		513				517			520
-----	--	-----	--	--	--	-----	--	--	-----

651	652	653				657	658		660
-----	-----	-----	--	--	--	-----	-----	--	-----

701	702	703	704	705					
-----	-----	-----	-----	-----	--	--	--	--	--

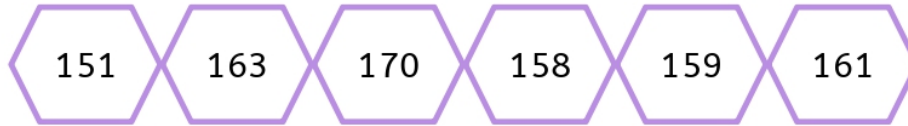
811	812				816	817			820
-----	-----	--	--	--	-----	-----	--	--	-----

931			934	935			938		
-----	--	--	-----	-----	--	--	-----	--	--



# Number Sense

Find and color the given numbers



151	152	153	154	155	156	157	158	159	160
161	162	163	164	165	166	167	168	169	170



551	552	553	554	555	556	557	558	559	560
561	562	563	564	565	566	567	568	569	570



331	332	333	334	335	336	337	338	339	340
341	342	343	344	345	346	347	348	349	350

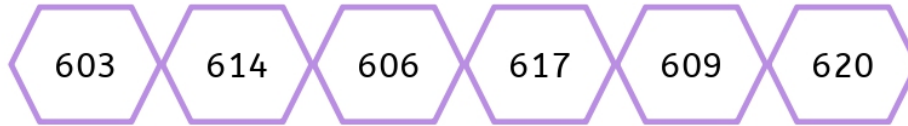


441	442	443	444	445	446	447	448	449	450
451	452	453	454	455	456	456	458	459	460



# Number Sense

Find and color the given numbers



601	602	603	604	605	606	607	608	609	610
611	612	613	614	615	616	617	618	619	620



731	732	733	734	735	736	737	738	739	740
741	742	743	744	745	746	747	748	749	750



501	502	503	504	505	506	507	508	509	510
511	512	513	514	515	516	517	518	519	520



851	852	853	854	855	856	857	858	859	860
861	862	863	864	865	866	867	868	869	870



# Number Sense

Find and color the given numbers



881	882	883	884	885	886	887	888	889	890
891	892	893	894	895	896	897	898	899	900



771	772	773	774	775	776	777	778	779	780
781	782	783	784	785	786	787	788	789	790



621	622	623	624	625	626	627	628	629	630
631	632	633	634	635	636	637	638	639	640

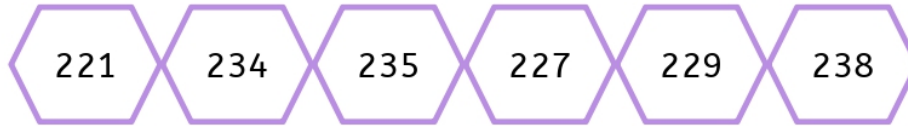


191	192	193	194	195	196	197	198	199	200
201	202	203	204	205	206	207	208	209	210



# Number Sense

Find and color the given numbers



221	222	223	224	225	226	227	228	229	230
231	232	233	234	235	236	237	238	239	240



971	972	973	974	975	976	977	978	979	980
981	982	983	984	985	986	987	988	989	990



101	102	103	104	105	106	107	108	109	110
111	112	113	114	115	116	117	118	119	120



271	272	273	274	275	276	277	278	279	280
281	282	283	284	285	286	287	288	289	290



# Number Sequence

Write the missing numbers

333				337
-----	--	--	--	-----

299	300			
-----	-----	--	--	--

855			858	
-----	--	--	-----	--

188	189			192
-----	-----	--	--	-----

941		943		945
-----	--	-----	--	-----

666	667		668	
-----	-----	--	-----	--


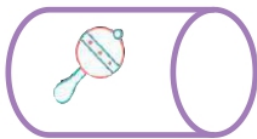




# Number Sequence

Write the missing numbers next to the given picture

101		103		105	106		108		110
111	112		114	115	116	117		119	
121		123	124		126	127	128		130
131	132	133		135		137	138		140
141	142		144	145	146	147		149	


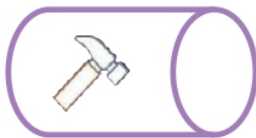




# Number Sequence

Write the missing numbers next to the given picture

501	502		504	505		507		509	
	512	513	514		516		518		520
521		523	524		526	527		529	
531	532		534	535	536		538	539	540
	542	543	544	545	546	547		549	550







# Number Sequence

Write the missing numbers next to the given picture

851	852	853	854		856	857		859	
861			864	865		867	868		870
871	872	873			876	877	878	879	
881		883	884	885	886	887		889	890
	892		894	895		897	898		900





# Number Sequence

Write the missing numbers

101	102	103						109	110
-----	-----	-----	--	--	--	--	--	-----	-----

231		233	234			237	238		
-----	--	-----	-----	--	--	-----	-----	--	--

311	312			315	316	317			
-----	-----	--	--	-----	-----	-----	--	--	--

121	122	123				127			130
-----	-----	-----	--	--	--	-----	--	--	-----

401	402				406	407	408		
-----	-----	--	--	--	-----	-----	-----	--	--



# Number Sequence

Write the missing numbers

661	662	663					668	669	670
671					676	677			

101				105	106	107			110
	112	113			116			119	120

841	842				846	847	848	849	
	852	853					858	859	

221	222		224	225				229	230
		233	234			237	238		



# Number Sequence

Write the missing numbers

336			339	340
-----	--	--	-----	-----

571	572			575
-----	-----	--	--	-----

991		993	994	
-----	--	-----	-----	--

401	402			
-----	-----	--	--	--

















885	886		888	
-----	-----	--	-----	--






674		675	676	
-----	--	-----	-----	--



# Number Sequence

Write the missing numbers next to the given picture

351		353		355	356	357		359	
	362	363	364	365	366		368	369	
371	372	373			376	377	378		380
381		383	384	385	384		388	389	
391	392			395	396	397	398		400





# Number Sequence

Write the missing numbers

441			444	445	446				450
	452					457			460

721		723				727			730
731	732				736			739	

201		203		205			208	209	210
			214		216				220

921	922	923	924					929	930
		933					938	939	940





# Number Sequence

Write the missing numbers

301	302								310
311	312	313	314	315					320
					326	327	328	329	330
331	332	333	334					339	340
341			344				348	349	350
351					356	357	358	359	360
		363	364	365	366	367	368		
371				375	376	377	378	379	380
381	382	383	384	385					390
391					396	397	398	399	400

401			404	405		407	408		410
411				415	416	417	418		420
421	422						428	429	430
			434	435	436	437			440
441					446	447	448	449	450
451	452		454		456		458		460
461				465	466				470
471	472	473	474	475	476				
481					486	487	488		490
491	492	493	494	495					



# Number Sequence

Write the missing numbers

501	502					507		509	510
511			514	515	516				520
521	522				526	527			530
531	532					537	538	539	540
541	542	543	544	545	546				
				555	556	557	558	559	560
561	562			565	566				
571				575	576				580
581	582	583	584	585	586				590
591				595		597	598	599	600

601									610
611	613	613		615	616		618		620
621	622	623		625				629	630
			634	635	636	637	638	639	640
641	642	643	644						650
651							658	659	660
661	662	663	664						670
				675	676	677	678	679	680
681				685	686	687			
691			694	695	696	697	698	699	



# Number Sequence

Write the missing numbers

161		163	164	165	166				170
	172		174			177			180

281	282	283				287			290
291			294	295	296				300

551		553	554		556				570
571			574	575			578	579	

771	772			775			778	779	780
	782	783	784				788	789	



# Number Sequence

Write the missing numbers

531	532			
-----	-----	--	--	--

856			859	
-----	--	--	-----	--

323		324		
-----	--	-----	--	--

121			124	
-----	--	--	-----	--

489				493
-----	--	--	--	-----

200	201			
-----	-----	--	--	--



# Number Sequence

Write the missing numbers

101	102			
-----	-----	--	--	--

236				240
-----	--	--	--	-----

951	952	953		
-----	-----	-----	--	--

434		436		438
-----	--	-----	--	-----

775	776		778	
-----	-----	--	-----	--

650			653	654
-----	--	--	-----	-----



# Number Sequence

Write the missing numbers

101		103	104			107	108	109	110
111	112	113	114	115	116				120
121	122	123					128	129	130
131				135	136	137			140
141	142	143						149	150
151	152		154	155		157		159	160
161	162	163				167	168		170
171				175	176				180
181						187	188	189	190
191	192	193	194	195	196				

					206	207	208	209	210
211	213							219	220
221				225	226	227	228	229	
231	232	233	234	235	236	237	238	239	240
241					246				250
251			254	255	256	257	258	259	
261	262	263	264	265					270
271					276	277	278	279	280
281			284	285	286				290
291	292	293					298	299	300



# Number Sequence

Write the missing numbers

701		703	704		706	707	708		710
711				715	716	717	718	719	720
721		723	724	725		727	728		730
731	732	733	734	735					740
741					746	747	748	749	750
751	752	753						759	760
			764	765	766	767			
771					576	777	778		780
				785	786	787	788	789	790
791									

				805	806	807	808	809	810
811	813							819	820
			824	825	826				830
831				835	836	837	838		
841	842	843			846	847			850
		853	854			857	858		
861	862	863	864	865	866	867	868	869	870
871					876	877			880
881	882	883	884					889	890
			894	895	896	897	898	899	900



# Number Sequence

Write the missing numbers

	902	903	904	905	906				910
911									920
921					926	927	928	929	930
931	932		934	935	936				940
		943	944	945	946	947			
951	952	953	954	955				959	960
			964	965	966	967	968	969	
971	972								980
					986	987	988	989	990
991	992	993	994	995					





# Number Sequence

Write the missing numbers

881	882	883					888	889	890
891					896	897	898		

331			334	335	336			339	340
341	342				346			349	350

901	902	903	904	905					910
911	912				916	917			920

961	962					967			970
971				974	975			979	



# Place Value

Write the place value for the number blocks

Two 10x10 grids, two 10x10 grids, and eight small blue cubes (two rows of four).

H

T

U

Two 10x10 grids, two 10x10 grids, one 10x10 grid, and two vertical purple rods (each 10 units high).

H

T

U

Four 10x10 grids, one 10x10 grid, one vertical purple rod (10 units high), and seven small blue cubes (one row of seven).

H

T

U

Two 10x10 grids, one 10x10 grid, ten vertical purple rods (each 10 units high), and nine small blue cubes (two rows of four and one single cube).

H

T

U



# Place Value

Write the place value for the number blocks

Four hundred and three

	H
	T
	U

One hundred and five

	H
	T
	U

Three hundred and five

	H
	T
	U

Two hundred and five

	H
	T
	U



# Place Value

Write the correct place value and the number

H	T	U

WHAT IS THE NUMBER ?

H	T	U

WHAT IS THE NUMBER ?



# Place Value

Write the correct place value and the number

400

H	T	U

WHAT IS THE NUMBER ?

425

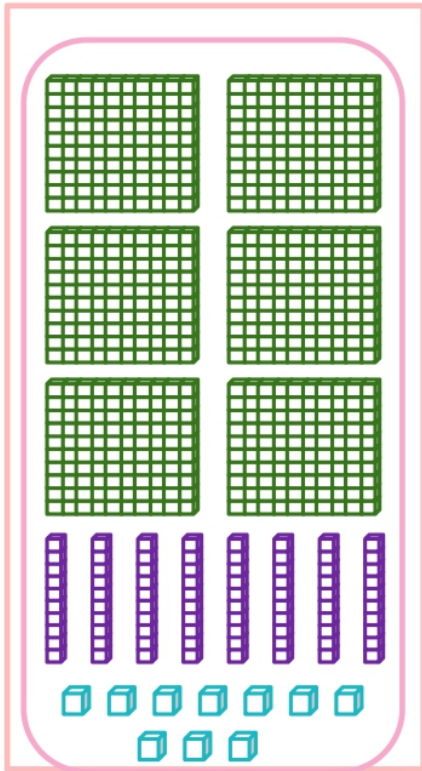
H	T	U

WHAT IS THE NUMBER ?




# Place Value

Write the correct place value and the number



H	T	U

WHAT IS THE NUMBER ?



H	T	U

WHAT IS THE NUMBER ?



# Place Value

Write the place value for the number blocks

Four 10x10 grids (400 blocks) and five 10x1 rods (50 blocks).

H

T

U

Four 10x10 grids (400 blocks), three 10x1 rods (30 blocks), and five 1x1 units (5 blocks).

H

T

U

Eight 10x10 grids (800 blocks).

H

T

U

Three 10x10 grids (300 blocks), one 10x1 rod (10 blocks), and one 1x1 unit (1 block).

H

T

U



# Place Value

Write the place value for the number blocks

H

T

U

H

T

U

H

T

U

H

T

U





# Place Value

Color the correct number for the place value blocks

315    199    277

880    928    215


624    519    111

636    840    377



# Place Value




Color the correct number for the place value blocks



179

267


231



669

995




810



229

435

527



788

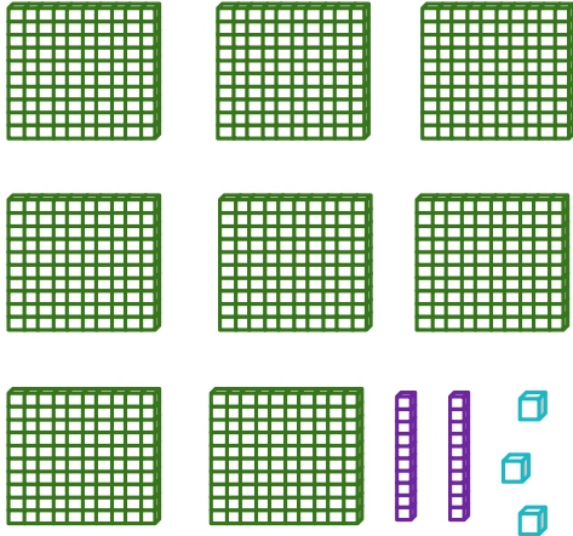
907

376



# Place Value

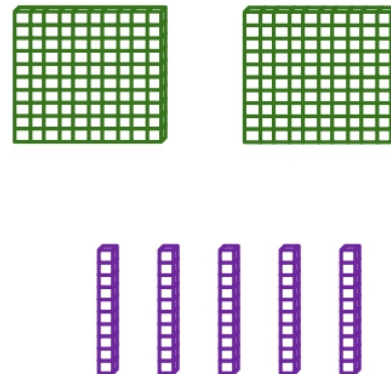
Color the correct number for the place value blocks



579

366

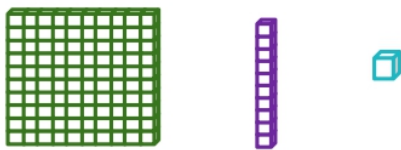
823



330

250

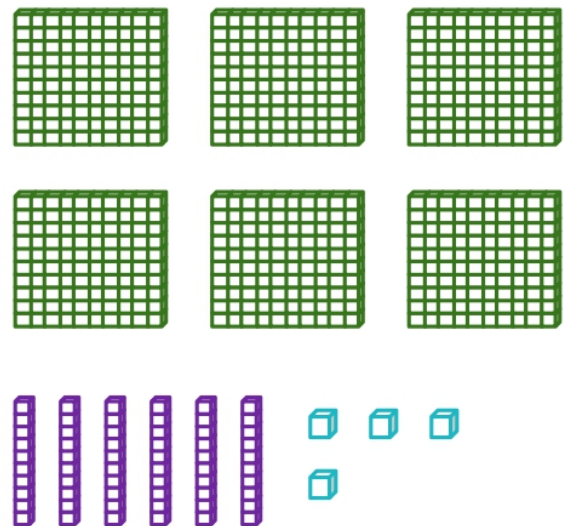
750



111

225

565



981

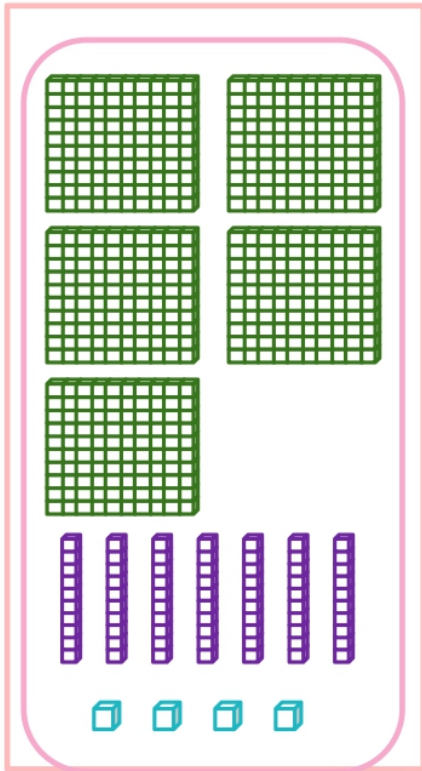
488

664



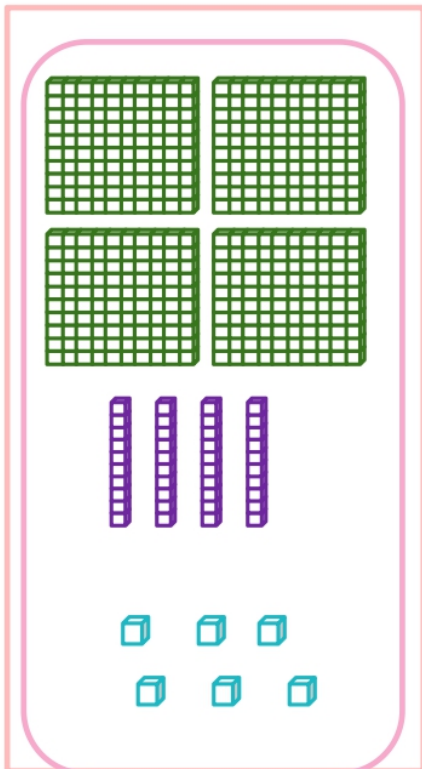
# Place Value

Write the correct place value and the number



H	T	U

WHAT IS THE NUMBER ?



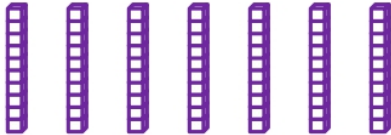

H	T	U

WHAT IS THE NUMBER ?



# Place Value

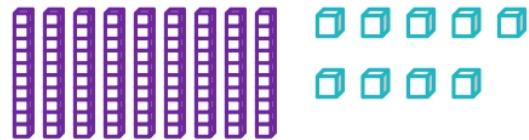



Color the correct number for the place value blocks



779

967



374



769

999



777



259

515

377



701

866

577